

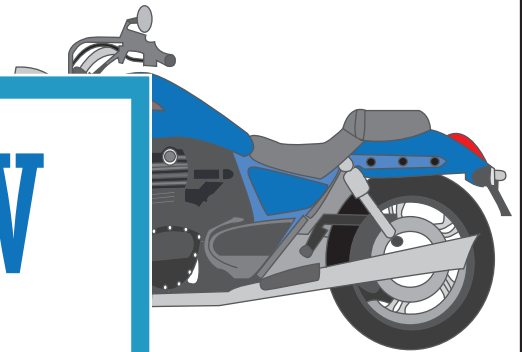
Name : \_\_\_\_\_

Medium: S1

## Line Graph - Motorbike Ride

Bradley takes off a road trip in his motorbike for six days. The number of miles covered by him per day is given below. Analyze the data and draw a line graph.

Day	Number of Miles
Monday	40
Tuesday	
Wednesday	
Thursday	
Friday	
Saturday	



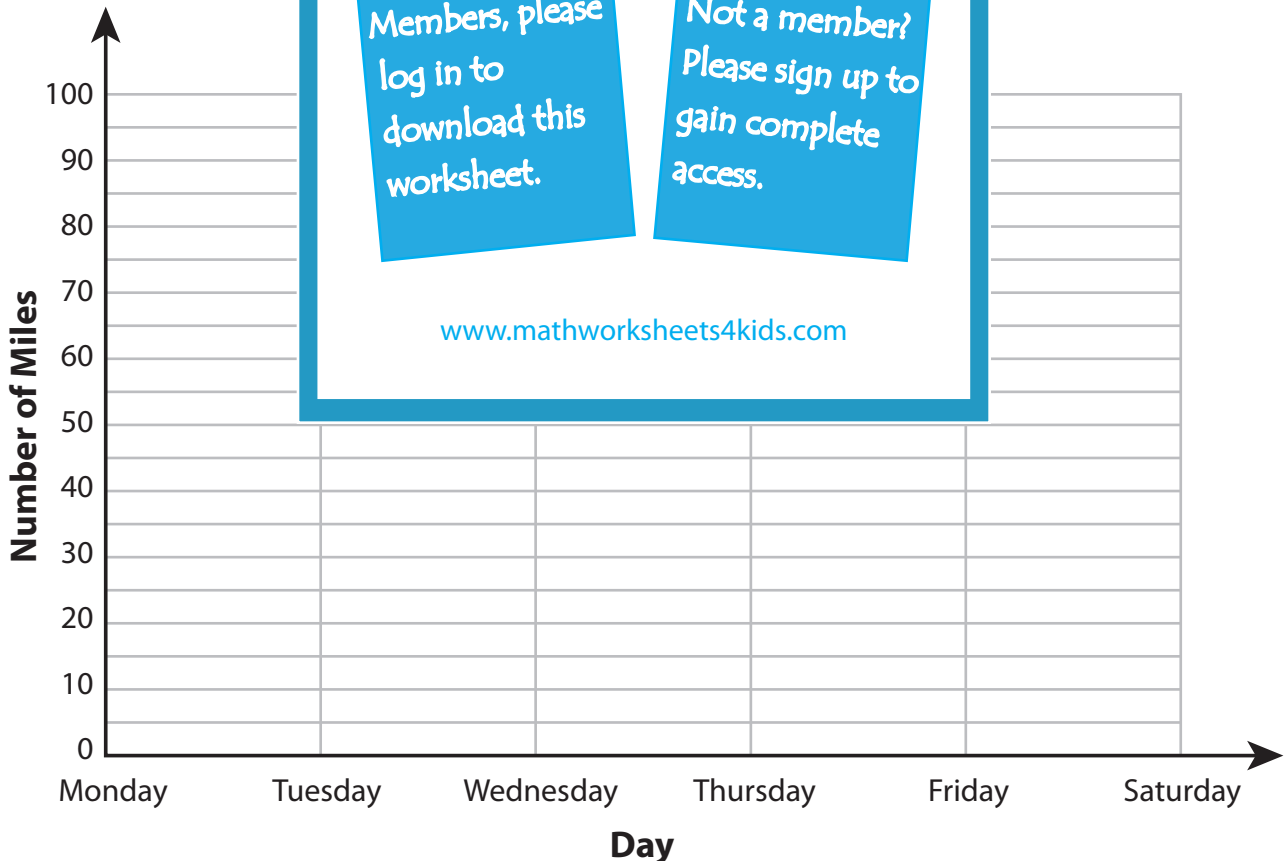
**PREVIEW**

Gain complete access to the largest collection of worksheets in all subjects!

Members, please log in to download this worksheet.

Not a member? Please sign up to gain complete access.

[www.mathworksheets4kids.com](http://www.mathworksheets4kids.com)



Name : \_\_\_\_\_

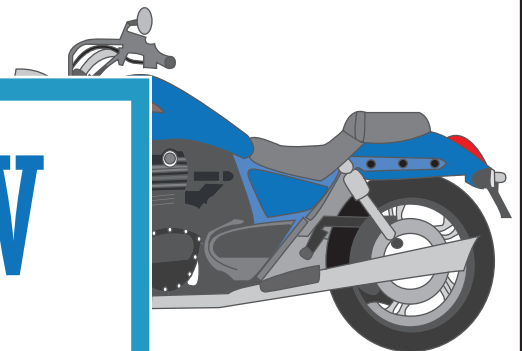
## Answer Key

Medium: S1

### Line Graph - Motorbike Ride

Bradley takes off a road trip in his motorbike for six days. The number of miles covered by him per day is given below. Analyze the data and draw a line graph.

Day	Number of Miles
Monday	40
Tuesday	
Wednesday	
Thursday	
Friday	
Saturday	



**PREVIEW**

Gain complete access to the largest collection of worksheets in all subjects!

Members, please log in to download this worksheet.

Not a member? Please sign up to gain complete access.

[www.mathworksheets4kids.com](http://www.mathworksheets4kids.com)

