

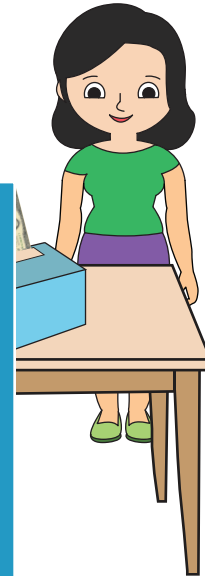
Name : _____

Medium: S2

Line Graph - Fundraising

Sarah collects funds for charity. The money (in dollars) collected by her at the end of each day is given below. Read the data and draw a line graph.

Day	Amount (\$)
Day 1	56
Day 2	
Day 3	
Day 4	
Day 5	
Day 6	



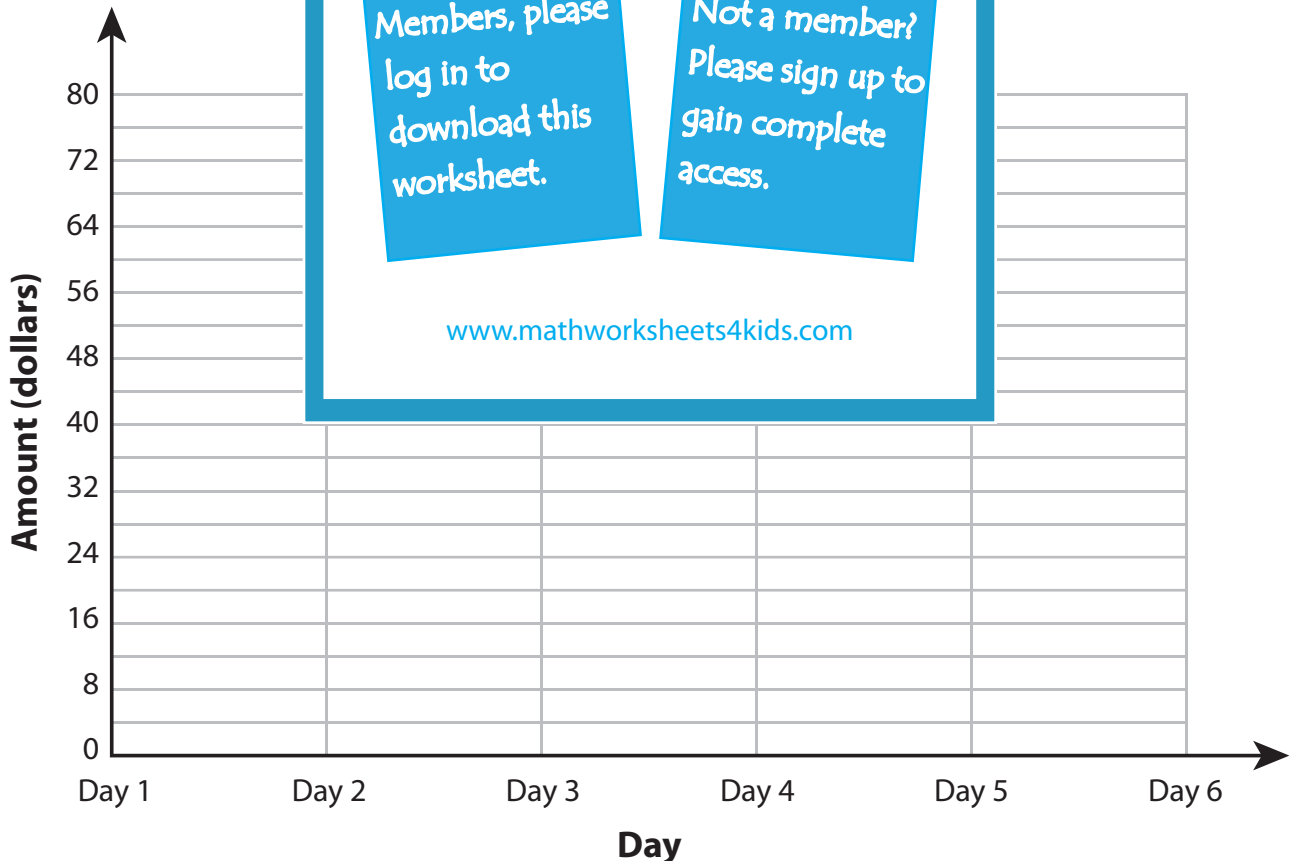
PREVIEW

Gain complete access to the largest collection of worksheets in all subjects!

Members, please log in to download this worksheet.

Not a member? Please sign up to gain complete access.

www.mathworksheets4kids.com



Name : _____

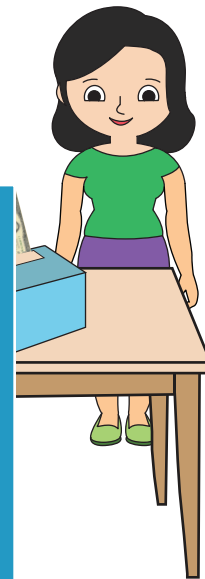
Answer Key

Medium: S2

Line Graph - Fundraising

Sarah collects funds for charity. The money (in dollars) collected by her at the end of each day is given below. Read the data and draw a line graph.

Day	Amount (\$)
Day 1	56
Day 2	32
Day 3	40
Day 4	52
Day 5	50
Day 6	48



PREVIEW

Gain complete access to the largest collection of worksheets in all subjects!

Members, please log in to download this worksheet.

Not a member? Please sign up to gain complete access.

www.mathworksheets4kids.com

