


Lines, Rays or Line segments: MCQ

Identify the model as a line, ray or line segment.

1)



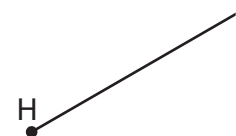
- a) ray AB
- b) line AB
- c) line segment AB
- d) none of the above

2)



- a) line segment DE
- b) ray DE
- d) none of the above

3)



PREVIEW

Gain complete access to the largest collection of worksheets in all subjects!

Members, please log in to download this worksheet.

Not a member? Please sign up to gain complete access.

www.mathworksheets4kids.com

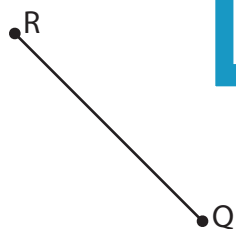
- b) line segment GH
- d) none of the above

4)



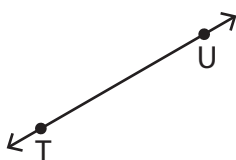
- b) ray LM
- d) none of the above

5)



- c) ray RQ
- d) none of the above

6)




- a) ray TU
- b) line TU
- c) line segment TU
- d) none of the above

Lines, Rays or Line segments: MCQ

Identify the model as a line, ray or line segment.

1)



a) ray AB

b) line AB

c) line segment AB

d) none of the above

2)

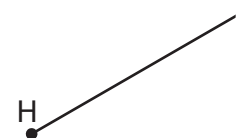


a) line segment DE

b) ray DE

d) none of the above

3)



PREVIEW

Gain complete access to the largest collection of worksheets in all subjects!

Members, please log in to download this worksheet.

Not a member? Please sign up to gain complete access.

www.mathworksheets4kids.com

b) line segment GH

d) none of the above

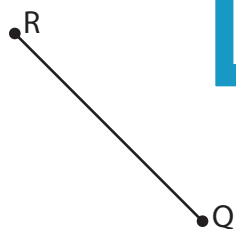
4)



b) ray LM

d) none of the above

5)

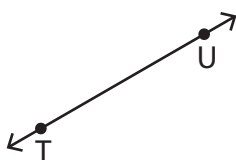


c) ray RQ

b) line QR

d) none of the above

6)



a) ray TU

b) line TU

c) line segment TU

d) none of the above