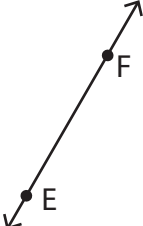
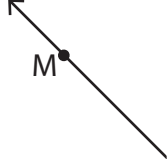



Lines, Rays or Line segments: MCQ


Identify the model as a line, ray or line segment.

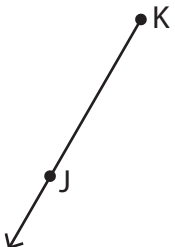
1)  a) line segment EF b) line FE
 c) ray EF d) none of the above

2)  a) ray NM b) ray MN
 d) none of the above

3)  b) ray PQ
 d) none of the above

4)  b) line segment UV
 d) none of the above

5)  b) line YX
 c) ray XY d) none of the above

6)  a) ray KJ b) line KJ
 c) line segment KJ d) none of the above

PREVIEW

Gain complete access to the largest collection of worksheets in all subjects!

Members, please log in to download this worksheet.

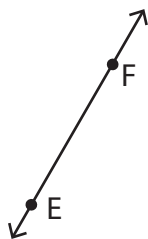
Not a member? Please sign up to gain complete access.

www.mathworksheets4kids.com

Lines, Rays or Line segments: MCQ

Identify the model as a line, ray or line segment.

1)



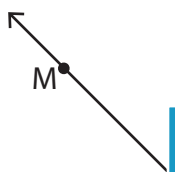
a) line segment EF

~~b) line FE~~

c) ray EF

d) none of the above

2)

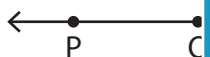


~~a) ray NM~~

b) ray MN

d) none of the above

3)



PREVIEW
Gain complete access to the largest collection of worksheets in all subjects!

b) ray PQ

d) none of the above

4)



Members, please log in to download this worksheet.

Not a member? Please sign up to gain complete access.

www.mathworksheets4kids.com

~~b) line segment UV~~

d) none of the above

5)

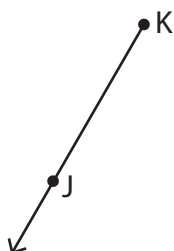


b) line YX

c) ray XY

~~d) none of the above~~

6)



~~a) ray KJ~~

b) line KJ

c) line segment KJ

d) none of the above