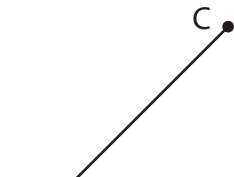
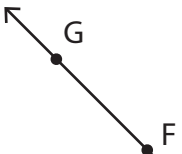



**Lines, Rays or Line segments: MCQ**


Identify the model as a line, ray or line segment.


- 1)  a) line DC                      b) ray DC  
c) line segment DC            d) none of the above

- 2)  a) line segment GF            b) line GF  
d) none of the above

- 3)  b) line segment SR  
d) none of the above

- 4)  b) ray AB  
d) none of the above

- 5)  b) ray WV  
c) ray VW                      d) none of the above

- 6)  a) ray KL                      b) line KL  
c) line segment KL            d) none of the above

**PREVIEW**

Gain complete access to the largest collection of worksheets in all subjects!

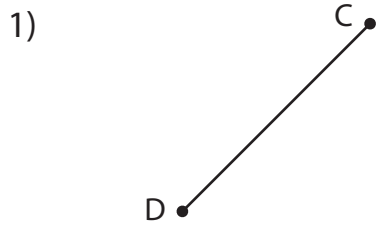
Members, please log in to download this worksheet.

Not a member? Please sign up to gain complete access.

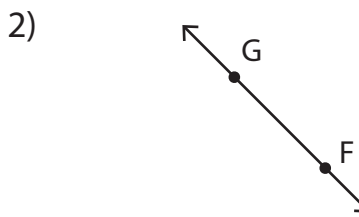
[www.mathworksheets4kids.com](http://www.mathworksheets4kids.com)

**Lines, Rays or Line segments: MCQ**

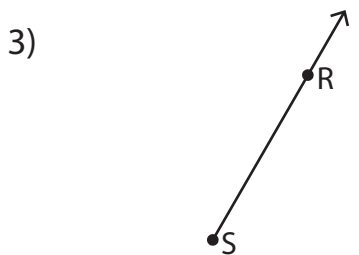
Identify the model as a line, ray or line segment.



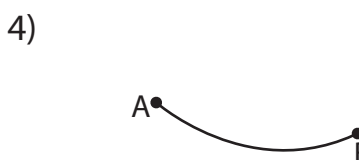
- a) line DC
- b) ray DC
- c) line segment DC
- d) none of the above



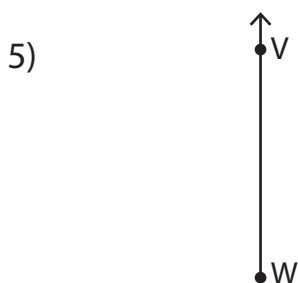
- a) line segment GF
- b) line GF
- d) none of the above



- b) line segment SR
- d) none of the above



- b) ray AB
- d) none of the above



- c) ray VW
- d) none of the above



- a) ray KL
- c) line segment KL
- b) line KL
- d) none of the above

# PREVIEW

Gain complete access to the largest collection of worksheets in all subjects!

Members, please log in to download this worksheet.

Not a member? Please sign up to gain complete access.

www.mathworksheets4kids.com