

Lines, Rays or Line segments: MCQ

Identify the model as a line, ray or line segment.

1)



a) ray ST

b) line ST

c) line segment ST

d) none of the above

2)



a) line PQ

b) line segment PQ

d) none of the above

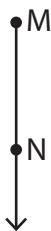
3)



b) ray EF

d) none of the above

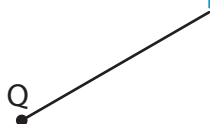
4)



b) line segment MN

d) none of the above

5)



c) line segment QR

d) none of the above

6)



a) ray TU

b) line TU

c) line segment TU

d) none of the above

PREVIEW

Gain complete access to the largest collection of worksheets in all subjects!

Members, please log in to download this worksheet.

Not a member? Please sign up to gain complete access.

www.mathworksheets4kids.com

Lines, Rays or Line segments: MCQ

Identify the model as a line, ray or line segment.

1)



a) ray ST

b) line ST

c) line segment ST

d) none of the above

2)



a) line PQ

b) line segment PQ

d) none of the above

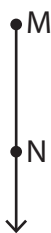
3)



b) ray EF

d) none of the above

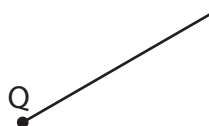
4)



b) line segment MN

d) none of the above

5)



c) line segment QR

d) none of the above

6)



a) ray TU

b) line TU

c) line segment TU

d) none of the above

PREVIEW

Gain complete access to the largest collection of worksheets in all subjects!

Members, please log in to download this worksheet.

Not a member? Please sign up to gain complete access.

www.mathworksheets4kids.com