

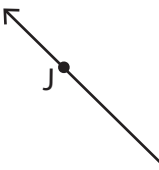


Lines, Rays or Line segments: MCQ


Identify the model as a line, ray or line segment.


1)  a) line segment AB b) line AB
 c) ray AB d) none of the above

2)  a) line segment UV b) line UV
 d) none of the above

3)  a) line segment JK b) ray KJ
 d) none of the above

4)  a) line segment PQ b) ray PQ
 d) none of the above

5)  a) line MN b) line segment MN
 d) none of the above

6)  a) line segment XY b) line XY
 c) ray XY d) none of the above

PREVIEW

Gain complete access to the largest collection of worksheets in all subjects!

Members, please log in to download this worksheet.

Not a member? Please sign up to gain complete access.

www.mathworksheets4kids.com

Lines, Rays or Line segments: MCQ

Identify the model as a line, ray or line segment.

1)



a) line segment AB

 b) line AB

c) ray AB

d) none of the above

2)

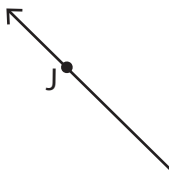
U

 a) line segment UV

b) line UV

d) none of the above

3)



PREVIEW

Gain complete access to the largest
collection of worksheets in all subjects!

Members, please
log in to
download this
worksheet.

Not a member?
Please sign up to
gain complete
access.

www.mathworksheets4kids.com

 b) ray KJ

d) none of the above

4)



b) ray PQ

d) none of the above

5)

M

N

 b) line segment MN

c) line MN

d) none of the above

6)



a) line segment XY

b) line XY

c) ray XY

 d) none of the above