




**Lines, Rays or Line segments**

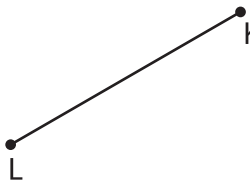
Example:

<p><b>A Line</b></p>  <p><math>\overleftrightarrow{PQ}</math> or <math>\overleftrightarrow{QP}</math></p>	<p><b>A Ray</b></p>  <p><math>\overrightarrow{TU}</math></p>	<p><b>A Line segment</b></p>  <p><math>\overline{YZ}</math> or <math>\overline{ZY}</math></p>
--	---	--

**Part - A**

Name each line, ray or line segment.

1)



\_\_\_\_\_

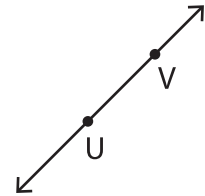
# PREVIEW

Gain complete access to the largest collection of worksheets in all subjects!

Members, please log in to download this worksheet.

Not a member? Please sign up to gain complete access.

[www.mathworksheets4kids.com](http://www.mathworksheets4kids.com)

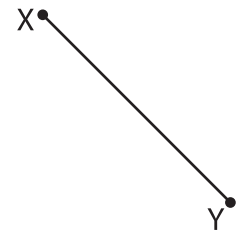


\_\_\_\_\_

4)



\_\_\_\_\_



\_\_\_\_\_

Draw and label each of the following.

1)  $\overleftrightarrow{JK}$

2)  $\overrightarrow{EF}$

3)  $\overline{MN}$