




Lines, Rays or Line segments

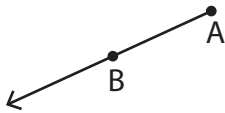
Example:

A Line	A Ray	A Line segment
 \overleftrightarrow{ST} or \overleftrightarrow{TS}	 \overrightarrow{LM}	 \overline{FG} or \overline{GF}

Part - A

Name each line, ray or line segment.

1)



4)



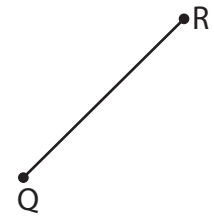
PREVIEW

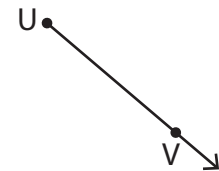
Gain complete access to the largest collection of worksheets in all subjects!

Members, please log in to download this worksheet.

Not a member? Please sign up to gain complete access.

www.mathworksheets4kids.com








Draw and label each of the following.

1) \overleftrightarrow{WX} 2) \overline{RS} 3) \overrightarrow{DC}

Lines, Rays or Line segments

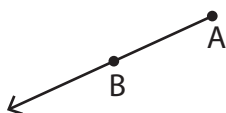
Example:

A Line	A Ray	A Line segment
 \overleftrightarrow{ST} or \overleftrightarrow{TS}	 \overrightarrow{LM}	 \overline{FG} or \overline{GF}

Part - A

Name each line, ray or line segment.

1)



\overrightarrow{AB}

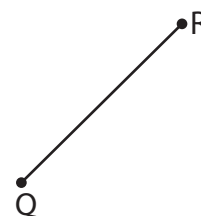
PREVIEW

Gain complete access to the largest
collection of worksheets in all subjects!

Members, please
log in to
download this
worksheet.

Not a member?
Please sign up to
gain complete
access.

www.mathworksheets4kids.com

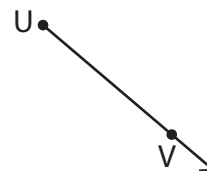


\overline{QR} or \overline{RQ}

4)

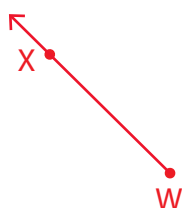


\overleftrightarrow{YZ} or \overleftrightarrow{ZY}



\overrightarrow{UV}

Draw and label each of the following.

1) \overrightarrow{WX} 2) \overline{RS} 3) \overleftrightarrow{DC} 