




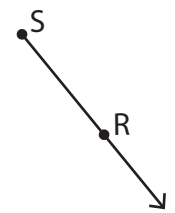
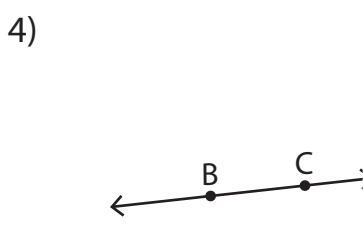
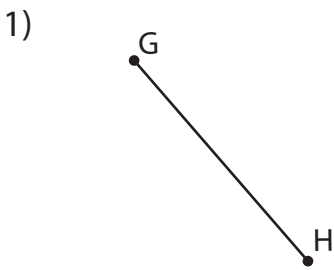
Lines, Rays or Line segments

Example:

<p>A Line</p>  <p>\overleftrightarrow{XY} or \overleftrightarrow{YX}</p>	<p>A Ray</p>  <p>\overrightarrow{RS}</p>	<p>A Line segment</p>  <p>\overline{AB} or \overline{BA}</p>
--	---	--

Part - A

Name each line, ray or line segment.



PREVIEW

Gain complete access to the largest collection of worksheets in all subjects!

Members, please log in to download this worksheet.

Not a member? Please sign up to gain complete access.

www.mathworksheets4kids.com

Draw and label each of the following.




1) \overrightarrow{EF}

2) \overleftrightarrow{JK}

3) \overline{PQ}

Lines, Rays or Line segments

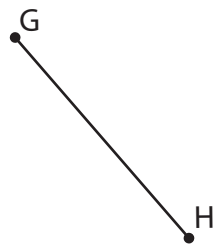
Example:

<p>A Line</p>  <p>\overleftrightarrow{XY} or \overleftrightarrow{YX}</p>	<p>A Ray</p>  <p>\overrightarrow{RS}</p>	<p>A Line segment</p>  <p>\overline{AB} or \overline{BA}</p>
--	---	--


Part - A

Name each line, ray or line segment.

1)




\overline{GH} or \overline{HG}

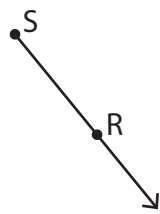


\overleftrightarrow{VW} or \overleftrightarrow{WV}

4)



\overleftrightarrow{BC} or \overleftrightarrow{CB}



\overrightarrow{SR}

PREVIEW

Gain complete access to the largest collection of worksheets in all subjects!


Members, please log in to download this worksheet.

Not a member? Please sign up to gain complete access.


www.mathworksheets4kids.com

Draw and label each of the following.

1) \overrightarrow{EF}



2) \overleftrightarrow{JK}



3) \overline{PQ}

