




Lines, Rays or Line segments

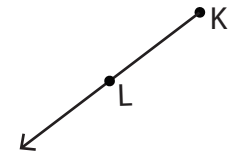
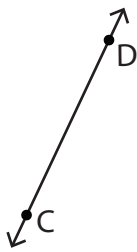
Example:

<p>A Line</p>  <p>\overleftrightarrow{KL} or \overleftrightarrow{LK}</p>	<p>A Ray</p>  <p>\overrightarrow{AB}</p>	<p>A Line segment</p>  <p>\overline{PQ} or \overline{QP}</p>
--	---	--

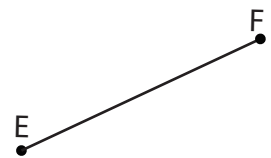
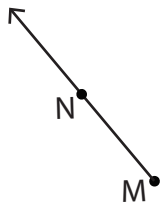
Part - A

Name each line, ray or line segment.

1)



4)



PREVIEW

Gain complete access to the largest collection of worksheets in all subjects!

Members, please log in to download this worksheet.

Not a member? Please sign up to gain complete access.

www.mathworksheets4kids.com

Draw and label each of the following.




1) \overline{YZ}

2) \overleftrightarrow{AB}

3) \overrightarrow{GH}

Lines, Rays or Line segments

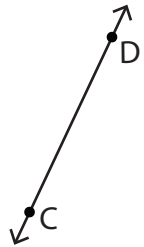
Example:

<p>A Line</p>  <p>\overleftrightarrow{KL} or \overleftrightarrow{LK}</p>	<p>A Ray</p>  <p>\overrightarrow{AB}</p>	<p>A Line segment</p>  <p>\overline{PQ} or \overline{QP}</p>
--	---	--

Part - A

Name each line, ray or line segment.

1)



\overleftrightarrow{CD} or \overleftrightarrow{DC}

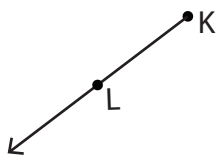
PREVIEW

Gain complete access to the largest collection of worksheets in all subjects!

Members, please log in to download this worksheet.

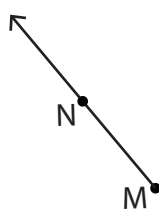
Not a member? Please sign up to gain complete access.

www.mathworksheets4kids.com

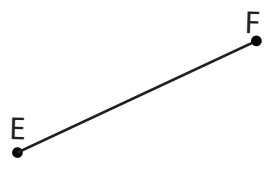


\overrightarrow{KL}

4)




\overleftrightarrow{MN}



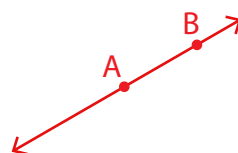
\overline{EF} or \overline{FE}

Draw and label each of the following.

1) \overline{YZ}



2) \overleftrightarrow{AB}



3) \overrightarrow{GH}

