

Name : _____

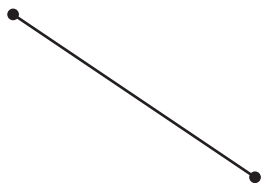
Points, Lines, Rays & Line segments

Sheet 1

Part - A

Write each as a point, line, ray or line segment.

1)




2)



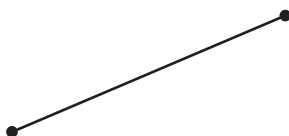
3)



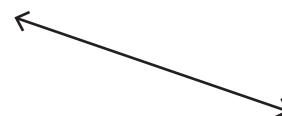
4)



5)



6)



Part - B

Draw the following.

1) A line

2) A ray

3) A line segment

Name : _____

Answer key

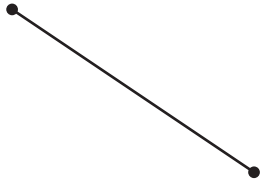
Points, Lines, Rays & Line segments

Sheet 1

Part - A


Write each as a point, line, ray or line segment.

1)



line segment

2)




line

3)



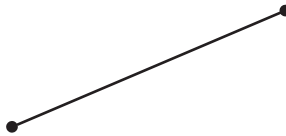
point

4)



ray

5)



line segment

6)



line


Part - B

Draw the following.

1) A line



2) A ray



3) A line segment

