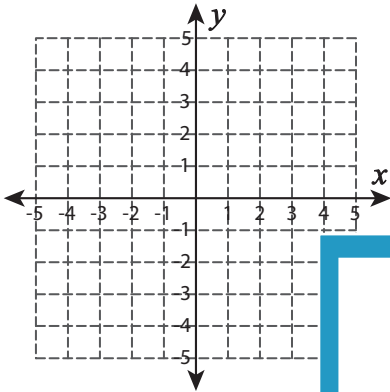


Graphing: Two Points

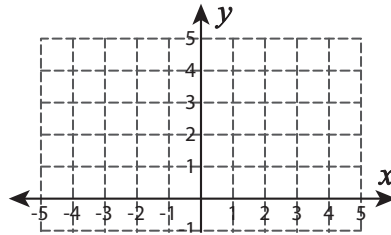
Sheet 1

Graph the line using the given points.

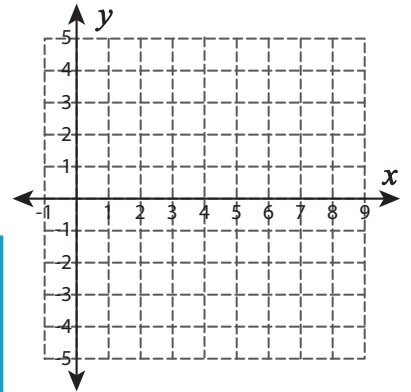
1) $(-2, 1)$ and $(0, -1)$



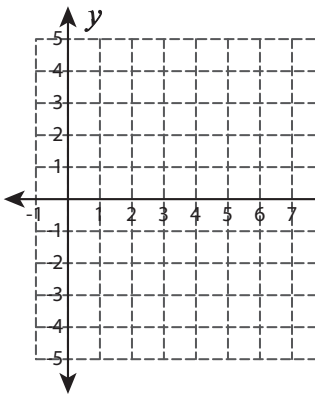
2) $(1, 3)$ and $(2, 1)$



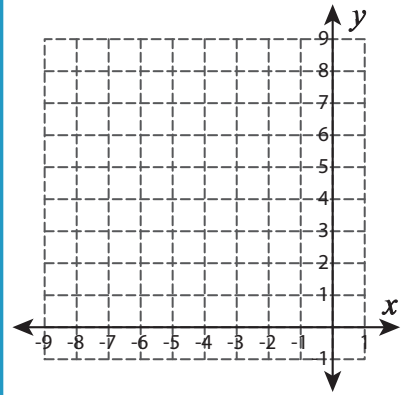
3) $(6, -2)$ and $(8, 2)$



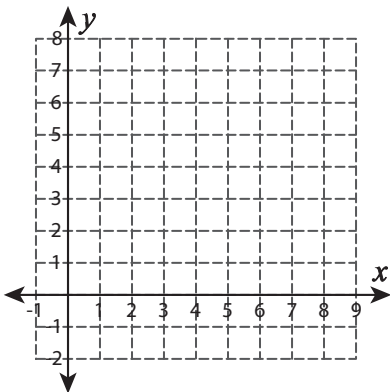
4) $(4, 3)$ and $(7, 0)$



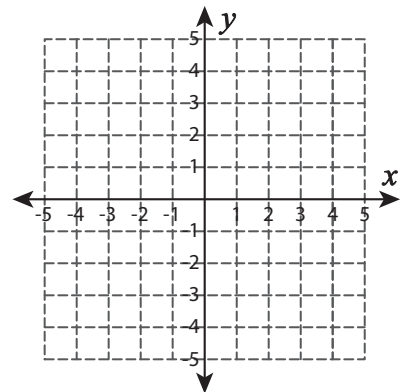
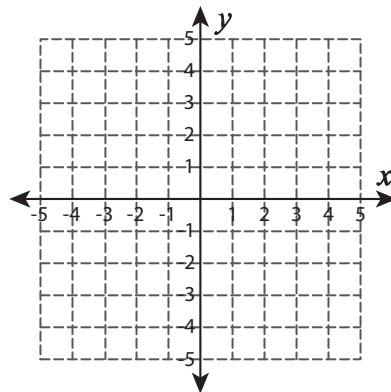
5) $(-2, 6)$ and $(-1, 4)$



6) $(3, 6)$ and $(5, 3)$



7) $(-3, 3)$ and $(5, -4)$



PREVIEW

Gain complete access to the largest collection of worksheets in all subjects!

Members, please log in to download this worksheet.

Not a member? Please sign up to gain complete access.

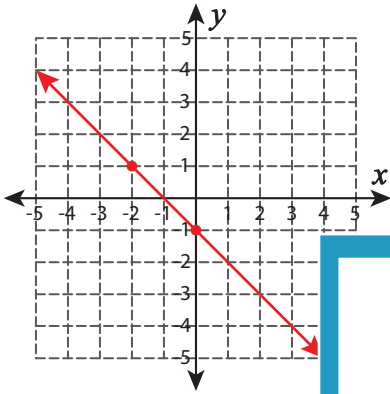
www.mathworksheets4kids.com

Answer key**Graphing: Two Points**

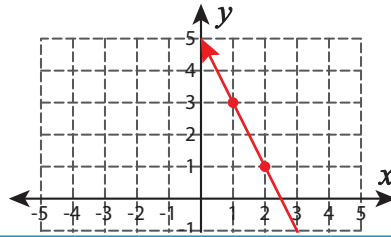
Sheet 1

Graph the line using the given points.

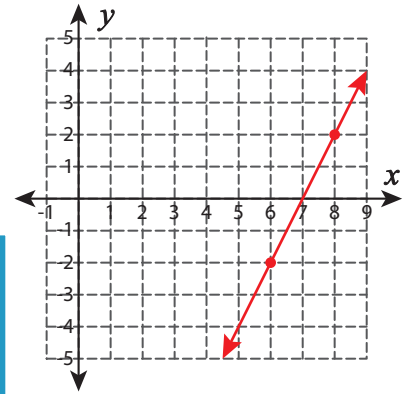
1) $(-2, 1)$ and $(0, -1)$



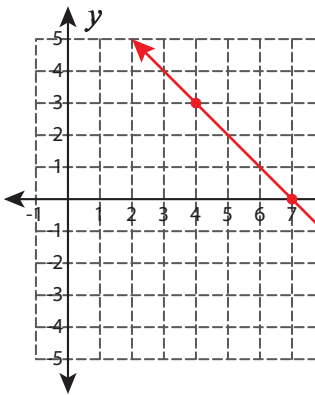
2) $(1, 3)$ and $(2, 1)$



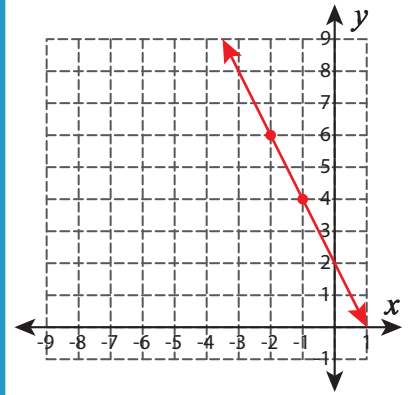
3) $(6, -2)$ and $(8, 2)$



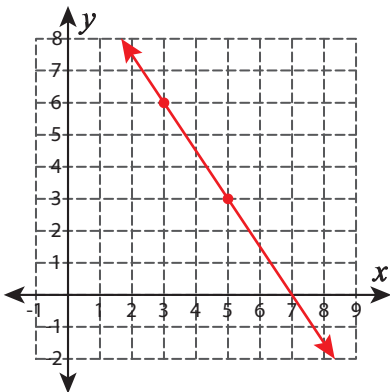
4) $(4, 3)$ and $(7, 0)$



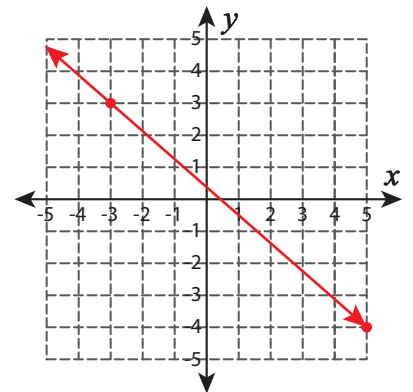
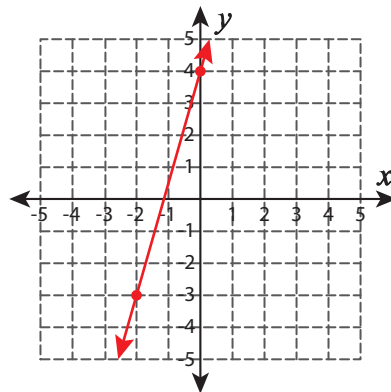
5) $(-2, 6)$ and $(-1, 4)$



6) $(3, 6)$ and $(5, 3)$



7) $(-3, 3)$ and $(5, -4)$

**PREVIEW**

Gain complete access to the largest collection of worksheets in all subjects!

Members, please log in to download this worksheet.

Not a member? Please sign up to gain complete access.

www.mathworksheets4kids.com