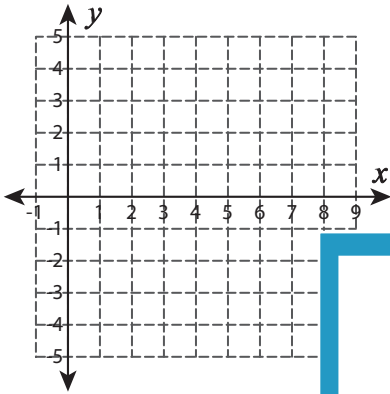


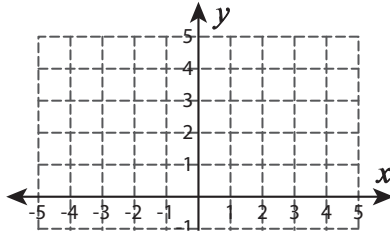
Graphing: Two Points

Graph the line using the given points.

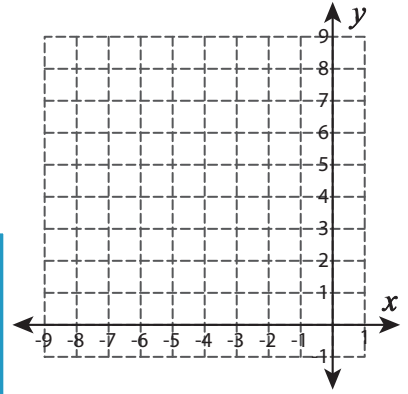
1) $(2, 1)$ and $(5, -2)$



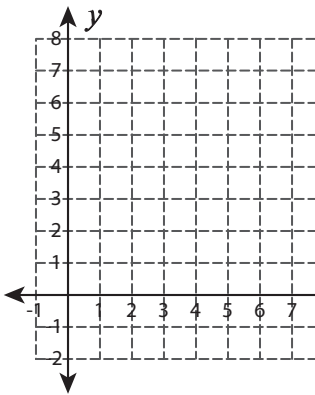
2) $(-4, -4)$ and $(1, 1)$



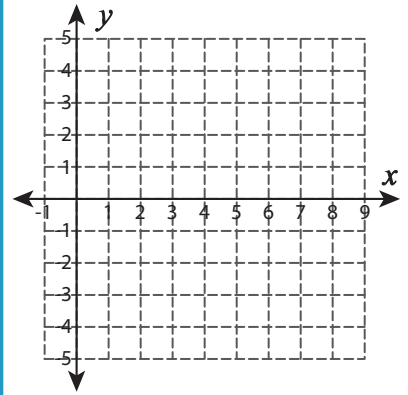
3) $(-4, 2)$ and $(-6, 4)$



4) $(2, 6)$ and $(7, 2)$



$(5, 1)$ and $(7, 3)$



PREVIEW

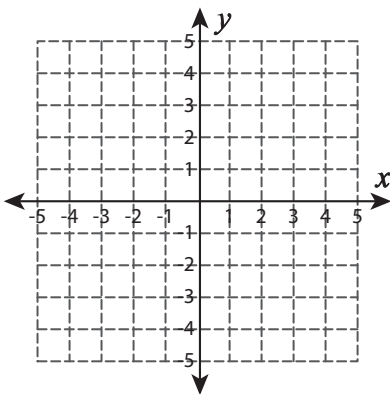
Gain complete access to the largest collection of worksheets in all subjects!

Members, please log in to download this worksheet.

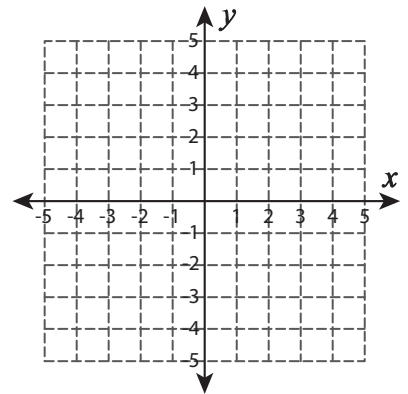
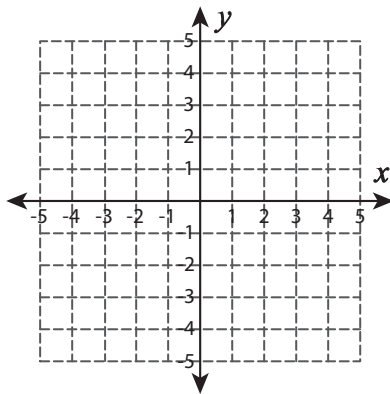
Not a member? Please sign up to gain complete access.

www.mathworksheets4kids.com

7) $(-4, 3)$ and $(-1, -3)$



$(-2, -4)$ and $(4, 3)$

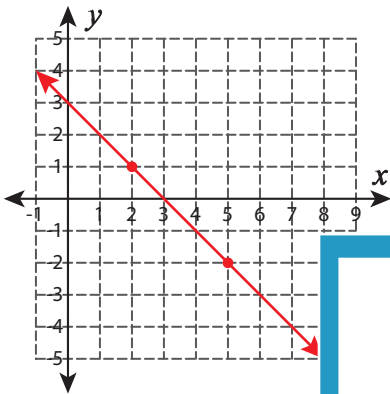


Answer key**Graphing: Two Points**

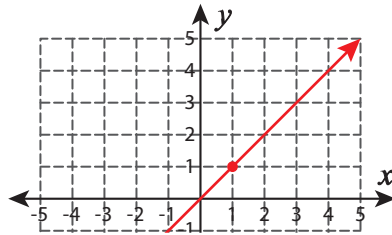
Sheet 3

Graph the line using the given points.

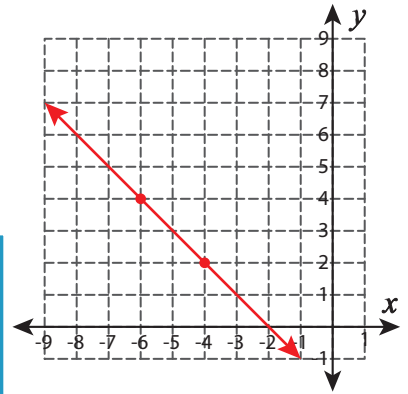
1) $(2, 1)$ and $(5, -2)$



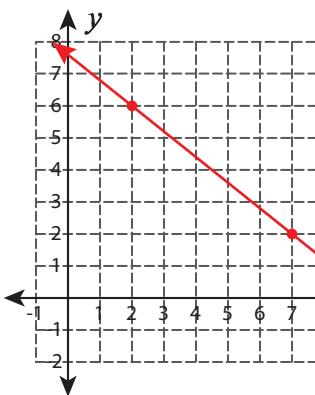
2) $(-4, -4)$ and $(1, 1)$



3) $(-4, 2)$ and $(-6, 4)$



4) $(2, 6)$ and $(7, 2)$



PREVIEW

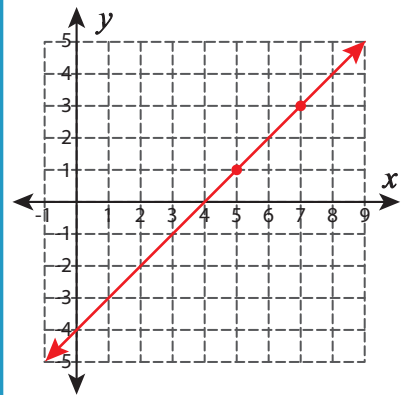
Gain complete access to the largest collection of worksheets in all subjects!

Members, please log in to download this worksheet.

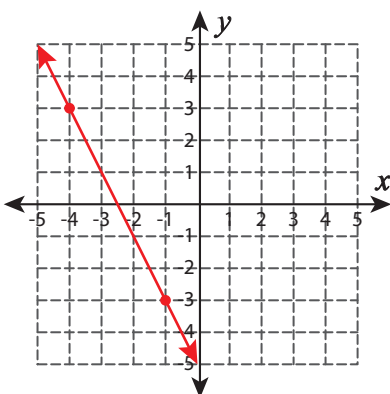
Not a member? Please sign up to gain complete access.

www.mathworksheets4kids.com

5) $(5, 1)$ and $(7, 3)$



7) $(-4, 3)$ and $(-1, -3)$



6) $(-2, -4)$ and $(4, 3)$

