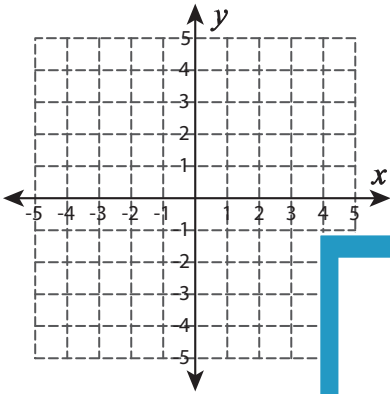


Graphing: Two Points

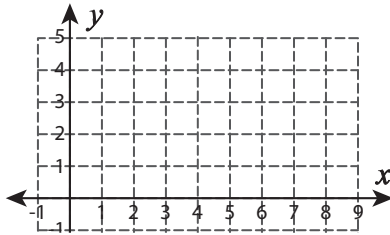
Sheet 4

Graph the line using the given points.

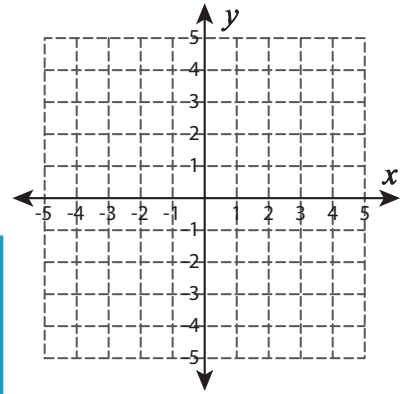
1) $(3, -2)$ and $(-4, 4)$



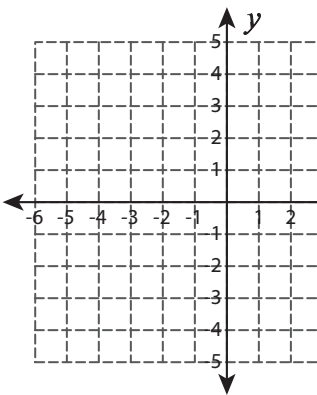
2) $(7, 4)$ and $(1, -3)$



3) $(4, 3)$ and $(-1, -2)$



4) $(-5, -3)$ and $(-4, 2)$



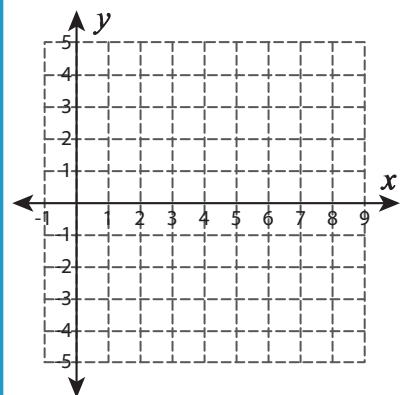
Gain complete access to the largest collection of worksheets in all subjects!

Members, please log in to download this worksheet.

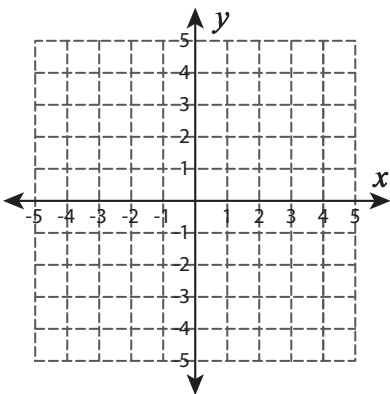
Not a member? Please sign up to gain complete access.

www.mathworksheets4kids.com

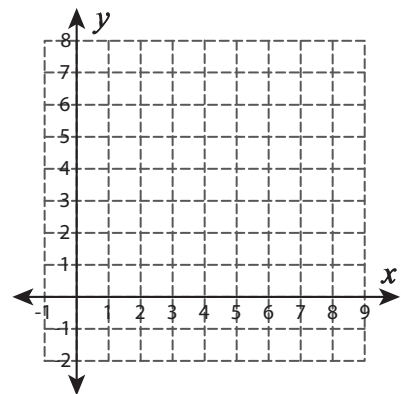
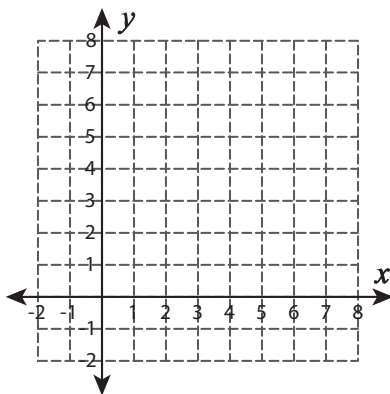
5) $(8, 0)$ and $(2, 2)$



6) $(-2, 0)$ and $(4, -3)$



7) $(7, 7)$ and $(7, 1)$

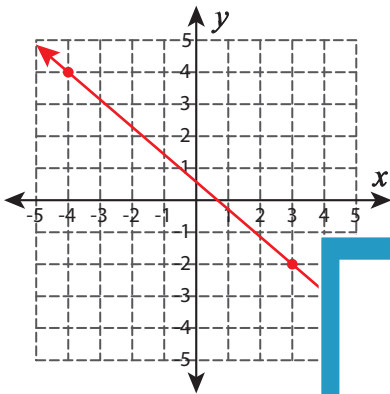


Answer key**Graphing: Two Points**

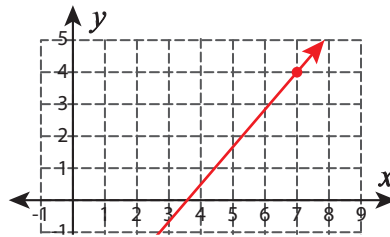
Sheet 4

Graph the line using the given points.

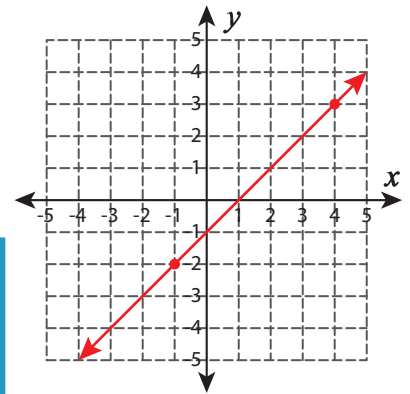
1) $(3, -2)$ and $(-4, 4)$



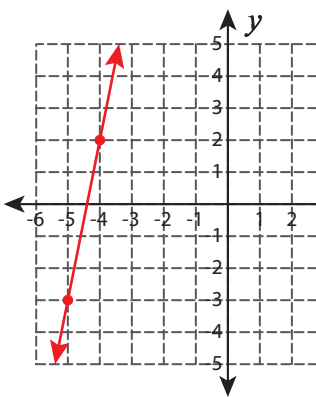
2) $(7, 4)$ and $(1, -3)$



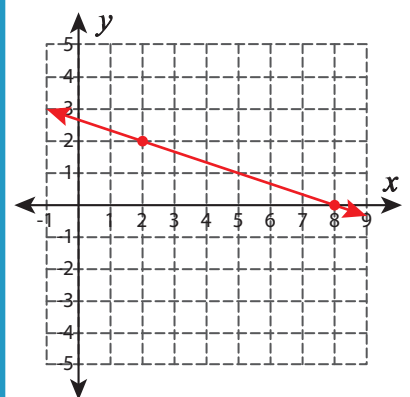
3) $(4, 3)$ and $(-1, -2)$



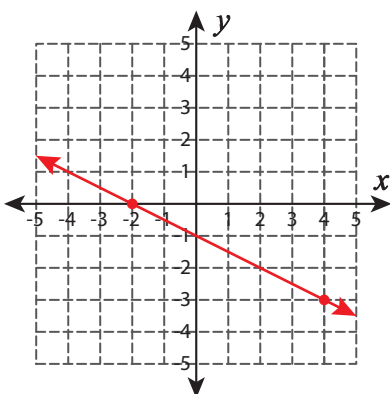
4) $(-5, -3)$ and $(-4, 2)$



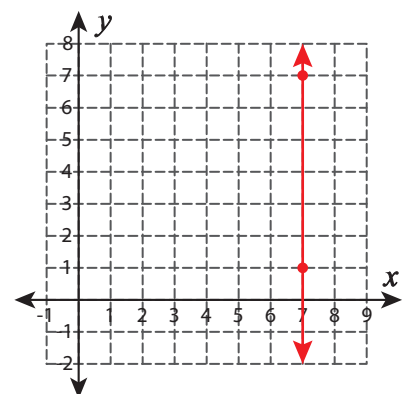
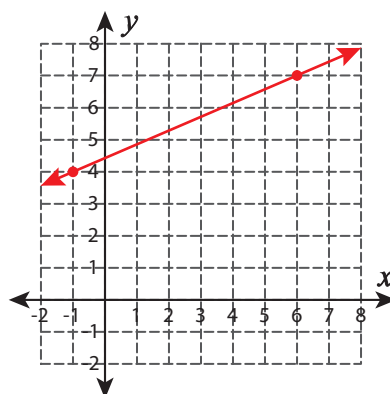
(8, 0) and (2, 2)



7) $(-2, 0)$ and $(4, -3)$



(7, 7) and (7, 1)

**PREVIEW**

Gain complete access to the largest collection of worksheets in all subjects!

Members, please log in to download this worksheet.

Not a member? Please sign up to gain complete access.

www.mathworksheets4kids.com