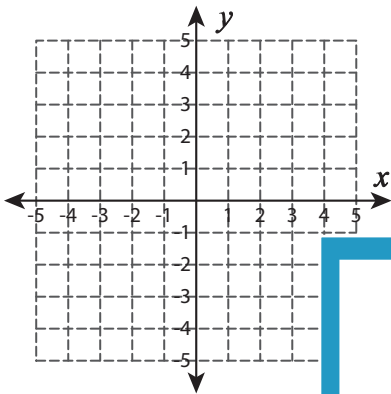


Graphing: Two Points

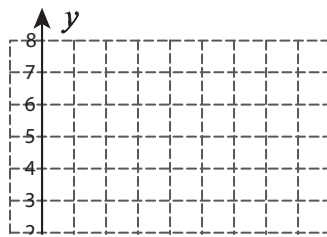
Sheet 5

Graph the line using the given points.

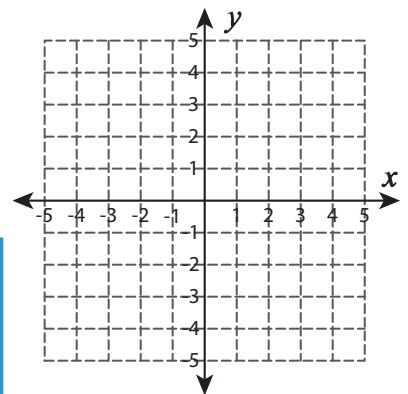
1) $(4, 3)$ and $(-3, -4)$



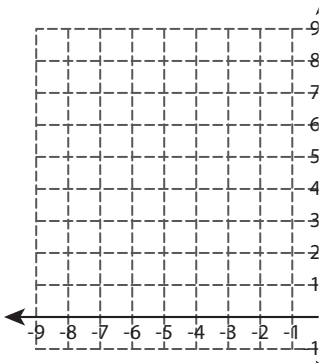
2) $(2, 5)$ and $(2, -1)$



3) $(-4, -3)$ and $(2, 3)$



4) $(-7, 8)$ and $(-1, 2)$



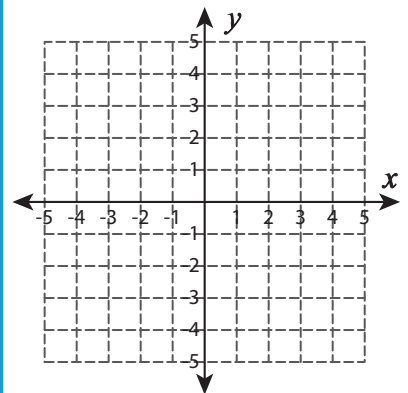
PREVIEW
Gain complete access to the largest collection of worksheets in all subjects!

Members, please log in to download this worksheet.

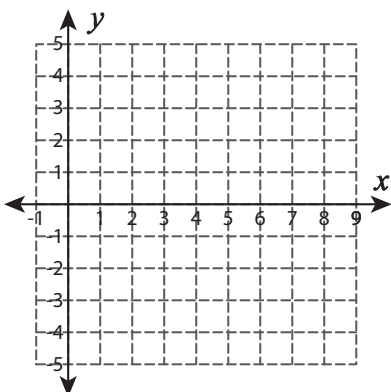
Not a member? Please sign up to gain complete access.

www.mathworksheets4kids.com

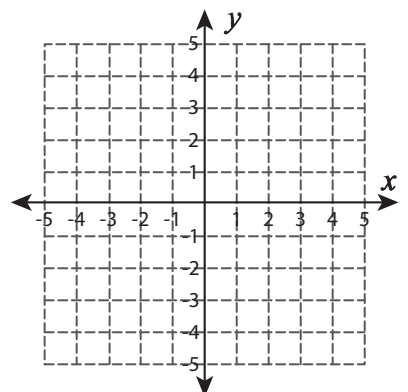
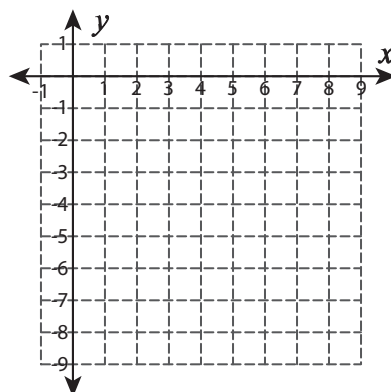
5) $(2, -2)$ and $(4, 1)$



6) $(1, 4)$ and $(6, -2)$



7) $(-3, -3)$ and $(-1, -2)$

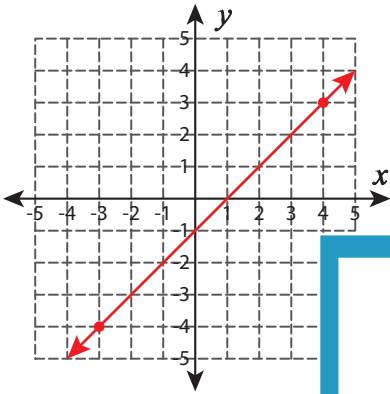


Answer key**Graphing: Two Points**

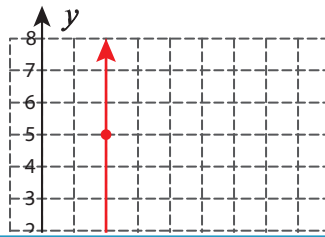
Sheet 5

Graph the line using the given points.

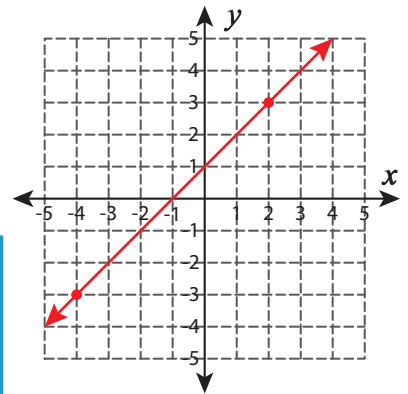
1) $(4, 3)$ and $(-3, -4)$



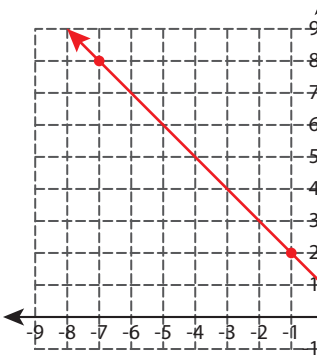
2) $(2, 5)$ and $(2, -1)$



3) $(-4, -3)$ and $(2, 3)$



4) $(-7, 8)$ and $(-1, 2)$



PREVIEW

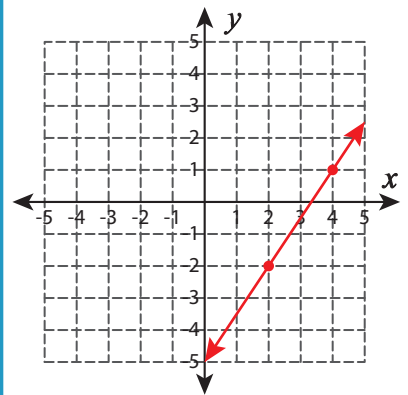
Gain complete access to the largest collection of worksheets in all subjects!

Members, please log in to download this worksheet.

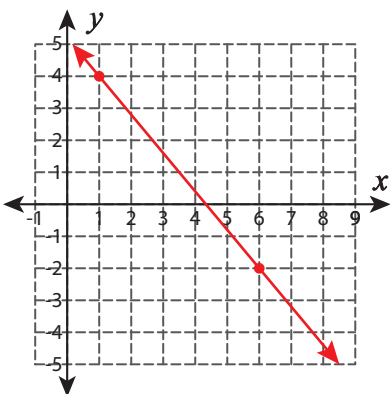
Not a member? Please sign up to gain complete access.

www.mathworksheets4kids.com

5) $(2, -2)$ and $(4, 1)$



6) $(1, 4)$ and $(6, -2)$



7) $(-3, -3)$ and $(-1, -2)$

