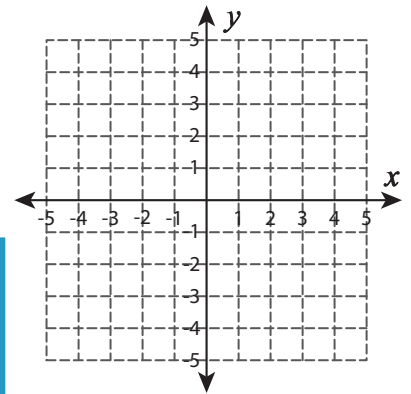

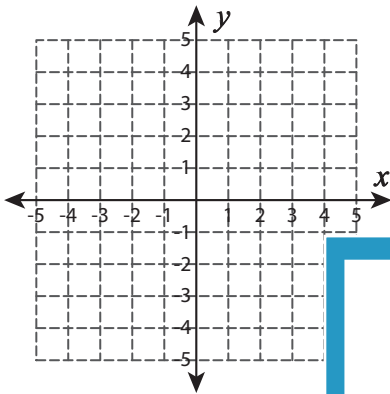


Graphing: Intercepts

Graph the line using the given intercepts.

- 1) x-intercept = 5 ; y-intercept = -2 2) x-intercept = -9 ; y-intercept = 7 3) x-intercept = 4 ; y-intercept = 3



PREVIEW

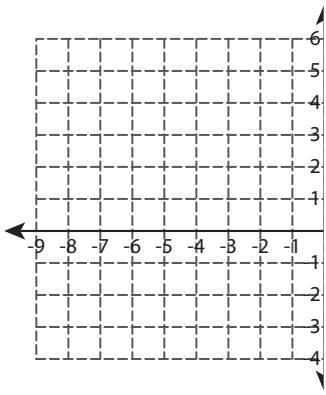
Gain complete access to the largest collection of worksheets in all subjects!

Members, please log in to download this worksheet.

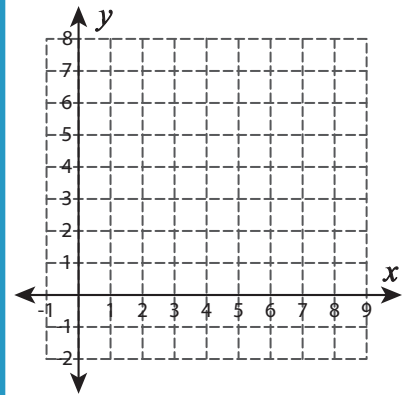
Not a member? Please sign up to gain complete access.

www.mathworksheets4kids.com

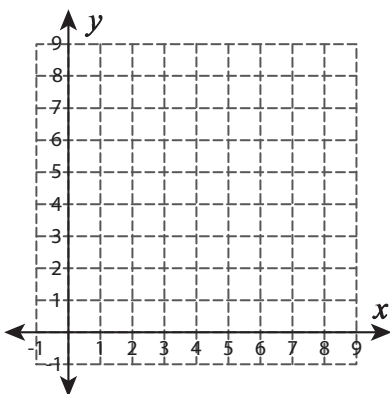
- 4) x-intercept = -6 ; y-intercept = 3



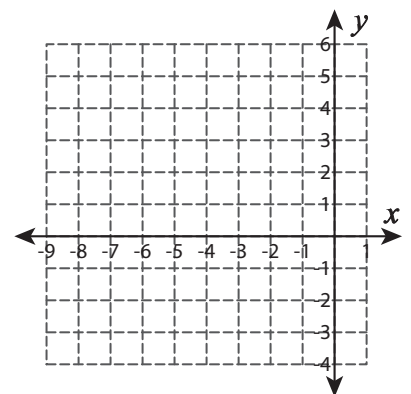
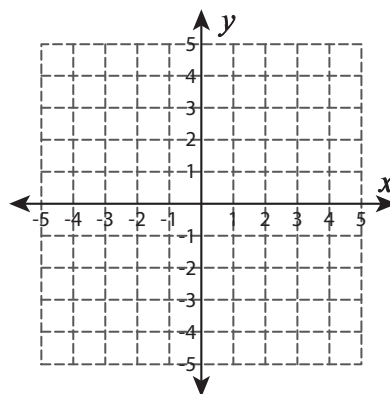
- 5) x-intercept = 3 ; y-intercept = 8



- 6) x-intercept = 8 ; y-intercept = -7



- 7) x-intercept = -7 ; y-intercept = 5

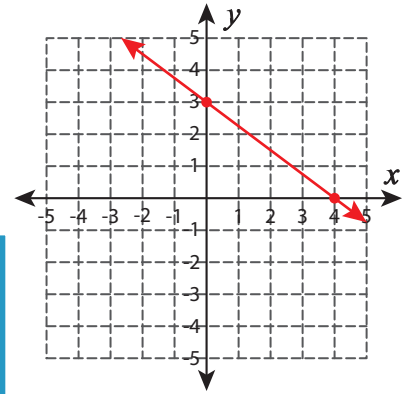
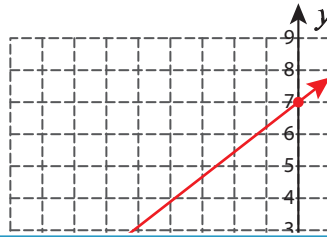
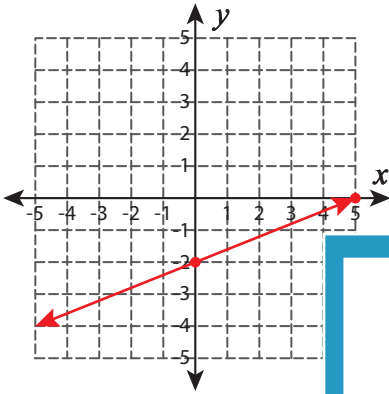


Answer key

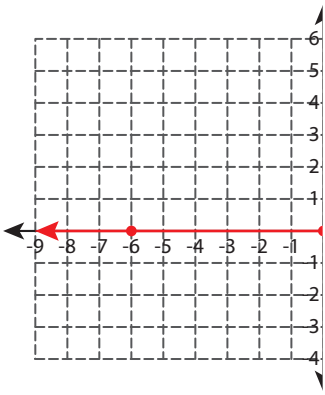
Graphing: Intercepts

Graph the line using the given intercepts.

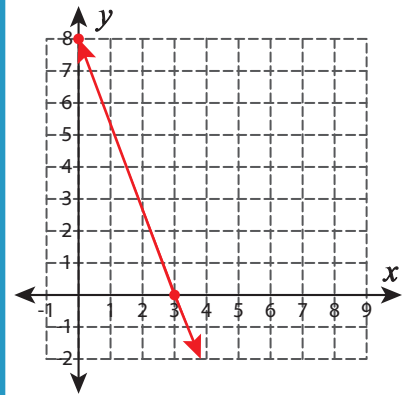
- 1) x-intercept = 5 ; y-intercept = -2 2) x-intercept = -9 ; y-intercept = 7 3) x-intercept = 4 ; y-intercept = 3



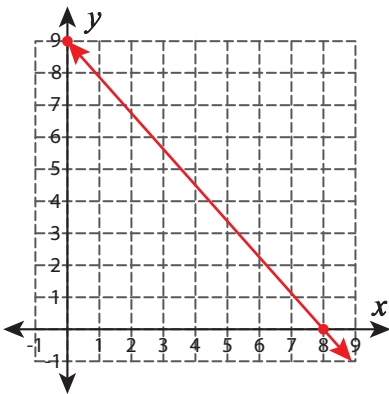
- 4) x-intercept = -6 ; y-intercept = 8



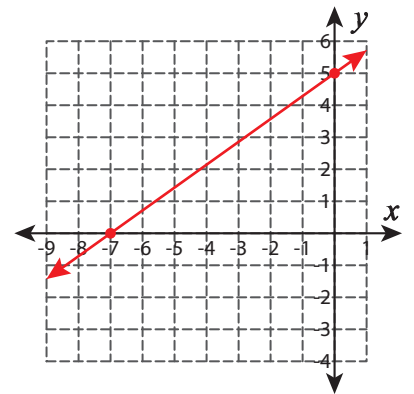
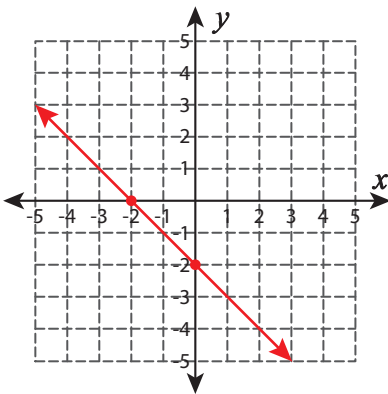
- 5) x-intercept = 3 ; y-intercept = 8



- 6) x-intercept = 8 ; y-intercept = 9



- 7) x-intercept = -7 ; y-intercept = 5



PREVIEW

Gain complete access to the largest collection of worksheets in all subjects!

Members, please log in to download this worksheet.

Not a member? Please sign up to gain complete access.

www.mathworksheets4kids.com