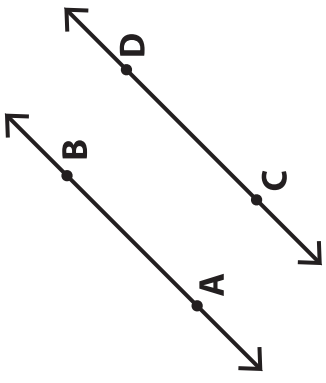
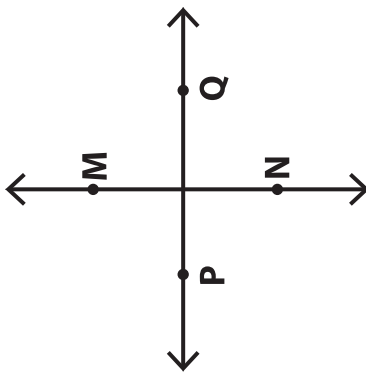
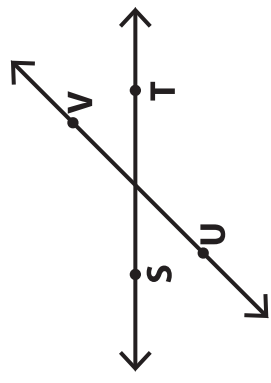


Name : _____

Parallel, Perpendicular and Intersecting Lines

| | Description | Figure | Symbol |
|----------------------------|--|--|---|
| Parallel Lines | Two lines remain the same distance apart at all times and never intersect. |  | $\overleftrightarrow{AB} \parallel \overleftrightarrow{CD}$ |
| Perpendicular Lines | Two lines that intersect and form right angles. |  | $\overleftrightarrow{PQ} \perp \overleftrightarrow{MN}$ |
| Intersecting Lines | Intersecting lines meet or cross each other. |  | \overleftrightarrow{ST} intersect \overleftrightarrow{UV} |