

Name : _____

Parallel, Perpendicular or Intersecting Lines

Sheet 1

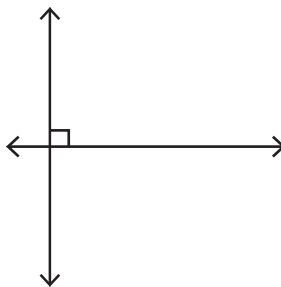
Part - A

Write each pair of lines as parallel, perpendicular or intersecting.


1)



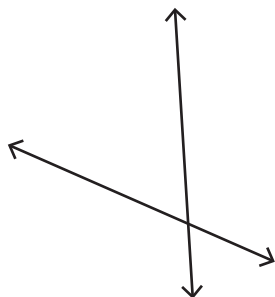
2)



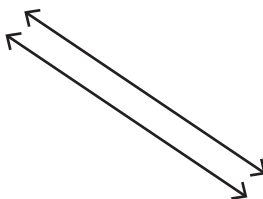
3)



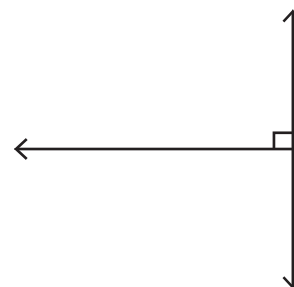
4)



5)



6)



Part - B

Draw the following.

1) Parallel lines

2) Perpendicular lines

3) Intersecting lines

Name : _____

Answer Key

Parallel, Perpendicular or Intersecting Lines

Sheet 1

Part - A

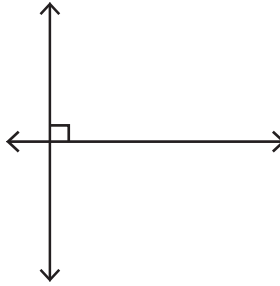
Write each pair of lines as parallel, perpendicular or intersecting.

1)




parallel

2)



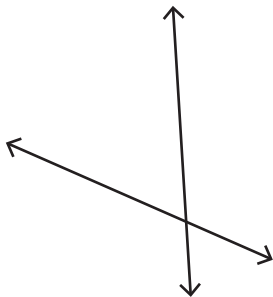
perpendicular

3)



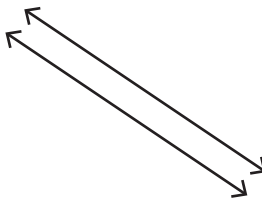
intersecting

4)



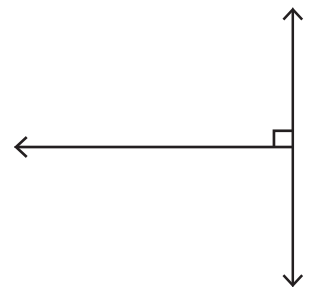
intersecting

5)



parallel

6)



perpendicular

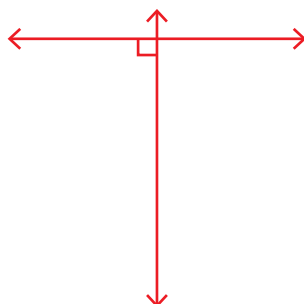
Part - B

Draw the following.

1) Parallel lines



2) Perpendicular lines



3) Intersecting lines

