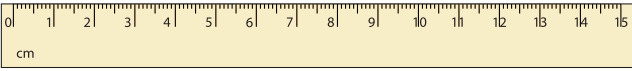


Name : _____

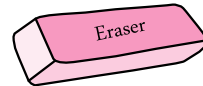
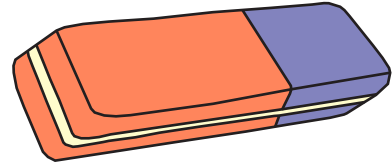
Long vs Short

Sheet 1

1. Which is longer?



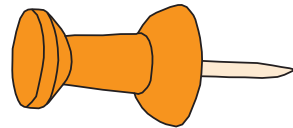
2. Which is shorter?



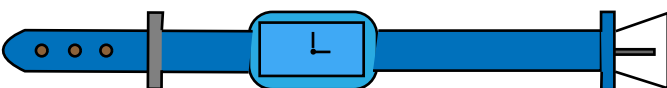
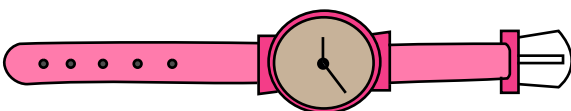
3. Which is shorter?



4. Which is longer?



5. Which is longer?



6. Which is shorter?

