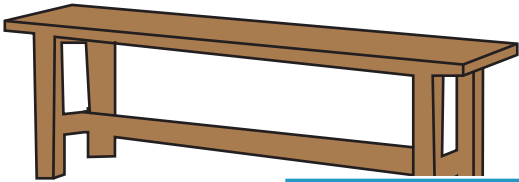


Name : \_\_\_\_\_

# Long vs Short

Sheet 2

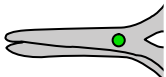
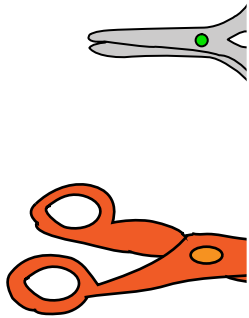
1. Which is shorter?



2. Which is longer?



3. Which is longer?



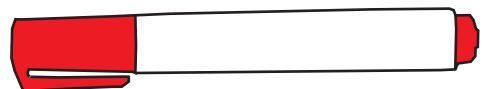
4. Which is shorter?



5. Which is longer?



6. Which is shorter?



## PREVIEW

Gain complete access to the largest collection of worksheets in all subjects!

Members, please log in to download this worksheet.

Not a member? Please sign up to gain complete access.

[www.mathworksheets4kids.com](http://www.mathworksheets4kids.com)