

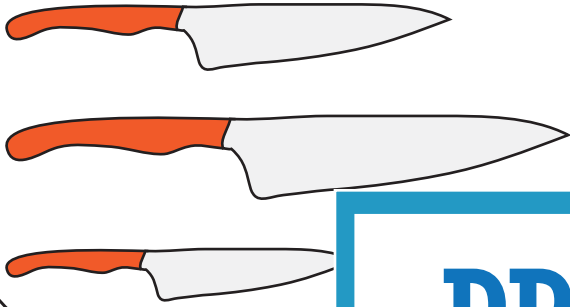
Name : \_\_\_\_\_

# Long vs Short

Sheet 2

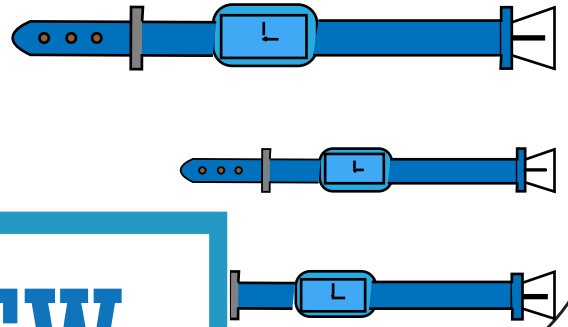
1

Tick the shortest knife.



2

Tick the longest watch.




3

Tick the longest



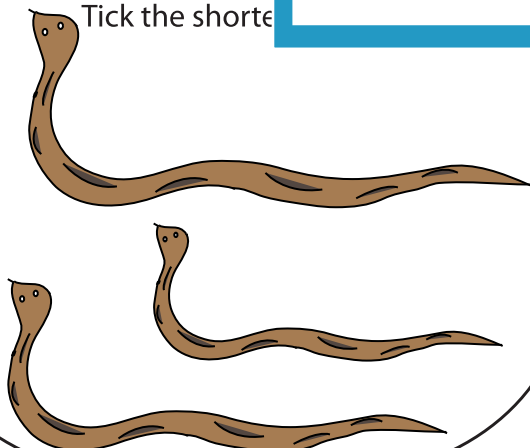
4

shortest fish.



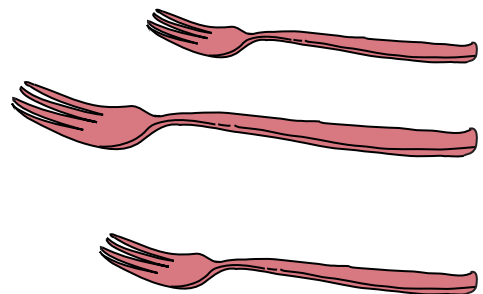
5

Tick the shortest



6

longest fork.



## PREVIEW

Gain complete access to the largest collection of worksheets in all subjects!

Members, please log in to download this worksheet.

Not a member? Please sign up to gain complete access.

[www.mathworksheets4kids.com](http://www.mathworksheets4kids.com)