


Name : _____

LONG vs SHORT


Sheet 1

Tick the long vehicle and cross out the short vehicle in each section.



1



2



3



PREVIEW


Gain complete access to the largest collection of worksheets in all subjects!

Members, please log in to download this worksheet.

Not a member? Please sign up to gain complete access.

www.mathworksheets4kids.com

5



6

