


Money Word problems

1) Bella made a trip to the toy store and bought the following items. What was the total amount Bella spent at the store?



Items	Price (\$)	Quantity	Total
Horse Toy		6	
Teddy Bear		5	
Total (\$)			

2) Valeria went to a store and bought the following items. Calculate the total amount Valeria spent at the store.



PREVIEW

Gain complete access to the largest collection of worksheets in all subjects!

Members, please log in to download this worksheet.


Not a member? Please sign up to gain complete access.

www.mathworksheets4kids.com

Calculate the total amount Valeria spent at the store.

Quantity	Total
3	
7	
Total (\$)	

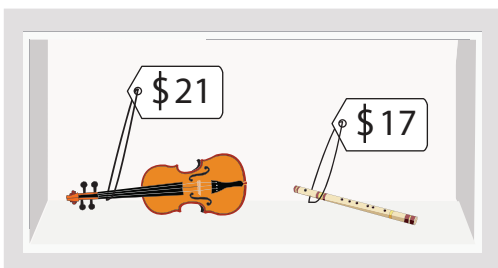
3) At a men's clothing store, Hector bought the following items. How much did he pay in total?



Calculate the total amount Hector paid at the store.

Quantity	Total
2	
9	
Total (\$)	

4) Hector, a musician, visited a musical instruments store and bought the following items. How much did he spend at the store?



Items	Price (\$)	Quantity	Total
Violin		4	
Flute		8	
Total (\$)			