


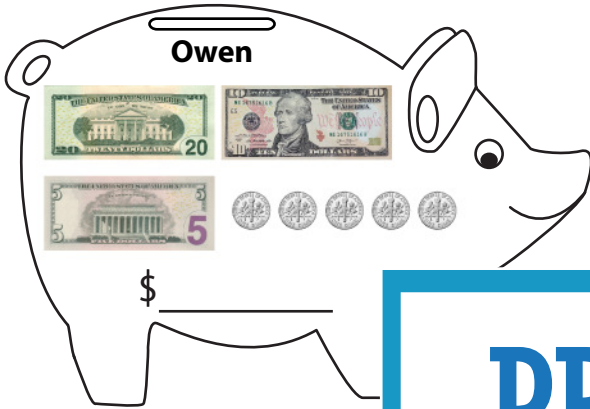


Comparing Money

Find the total amount in each piggy bank and answer the questions.



PREVIEW

Gain complete access to the largest collection of worksheets in all subjects!

Members, please log in to download this worksheet.

Not a member? Please sign up to gain complete access.

www.mathworksheets4kids.com

- 1) Of all the kids, who has saved the most money? _____
- 2) Who has saved the same amount as Irene? _____
- 3) Who has saved more, Suzy or Noah? _____
- 4) Who has the least amount of money in their piggy banks? _____
- 5) Arrange the amounts saved in the piggy banks from the least to the greatest.
