


Counting Money

1)




Clara wants to buy a pair of shoes. Count the bills and coins in her wallet and find how much money she has.

2)



Fiona is on her way to purchase a pack of chips and a bottle of orange juice. Count the bills and coins and determine how much money is in her purse.

3)




Olivia is purchasing a book and a pen. Count the bills and coins in her wallet and figure out how much money she has.

4)



Sarah empties her purse, filled with coins and bills. Count the money and find out the total amount she has.

5)



Hugh takes all the coins and bills out of his wallet. Count the money and calculate the total amount he has.
