


Making Change

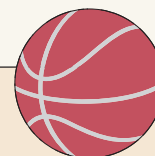
Steve's Sporting Goods




\$51.55



\$35.00



\$11.99



\$9.87



\$12.50

PREVIEW
Gain complete access to the largest collection of worksheets in all subjects!

Members, please log in to download this worksheet.

Not a member? Please sign up to gain complete access.

www.mathworksheets4kids.com

- | | | |
|----|----------------------------------------------------------------------------------------------------------------------------------------|-----------------------------------|
| 1) | Ken buys a soccer ball.
What is the price of the soccer ball?
How much change did he receive? | \$15.00

_____ |
| 2) | Hugh buys a baseball bat.
What is the price of the baseball bat?
How much change did he receive? | \$100.00

_____ |
| 3) | Ursula buys a basketball.
What is the price of the basketball?
How much change did she receive? | \$50.00

_____ |
| 4) | Tim buys a skateboard. He pays the cashier \$40.00.
What is the price of the skateboard?
How much change did he receive? | \$40.00

_____ |
| 5) | Jenna buys a jumping rope. She pays the cashier \$10.00.
What is the price of the jumping rope?
How much change did she receive? | \$10.00

_____ |