



Name : \_\_\_\_\_



# More / Fewer

Sheet 1

1) Tick the basket with more eggplants.



2) Tick the basket with few bananas.



## PREVIEW


Gain complete access to the largest collection of worksheets in all subjects!

Members, please log in to download this worksheet.


Not a member? Please sign up to gain complete access.

[www.mathworksheets4kids.com](http://www.mathworksheets4kids.com)


3) Tick the basket with more pineapples.





4) Tick the basket with few tomatoes.



5) Tick the basket with few radishes.



6) Tick the basket with more mangoes.





Name : \_\_\_\_\_

## Answer Key



# More / Fewer

Sheet 1

1) Tick the basket with more eggplants.



2) Tick the basket with few bananas.



# PREVIEW


Gain complete access to the largest collection of worksheets in all subjects!

Members, please log in to download this worksheet.


Not a member? Please sign up to gain complete access.

[www.mathworksheets4kids.com](http://www.mathworksheets4kids.com)


3) Tick the basket with more



h few tomatoes.



5) Tick the basket with few radishes.



h more mangoes.

