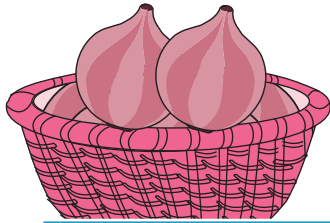
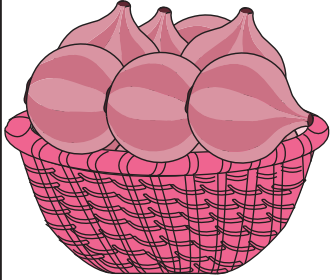


Name : _____



More / Fewer

Sheet 3

1) Tick the basket with more onions.



2) Tick the basket with few apples.



PREVIEW


Gain complete access to the largest collection of worksheets in all subjects!

Members, please log in to download this worksheet.


Not a member? Please sign up to gain complete access.

www.mathworksheets4kids.com



3) Tick the basket with few oranges.





4) Tick the basket with more pumpkins.



5) Tick the basket with more tomatoes.



6) Tick the basket with few bananas.




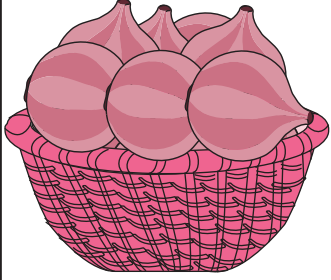
Name : _____

Answer Key



More / Fewer

Sheet 3

1) Tick the basket with more onions.



2) Tick the basket with few apples.



PREVIEW


Gain complete access to the largest collection of worksheets in all subjects!

Members, please log in to download this worksheet.


Not a member? Please sign up to gain complete access.

www.mathworksheets4kids.com



3) Tick the basket with few oranges.



4) Tick the basket with more pumpkins.



5) Tick the basket with more tomatoes.



6) Tick the basket with few bananas.

