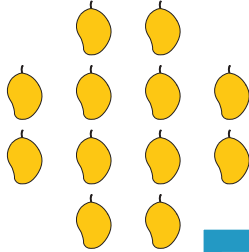


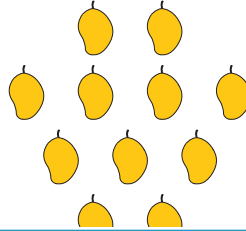
More vs. Fewest

1) Check the group with the fewest mangoes.

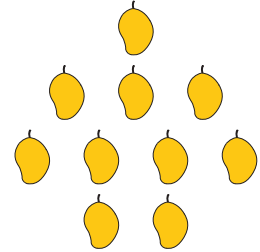
a)



b)

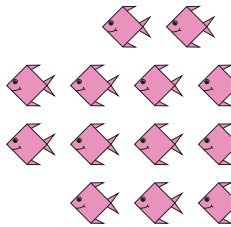


c)



2) Check the group

a)



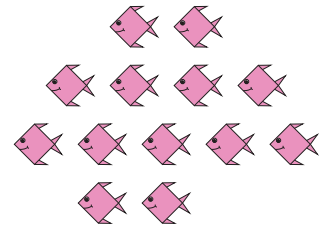
PREVIEW

Gain complete access to the largest collection of worksheets in all subjects!

Members, please log in to download this worksheet.


Not a member? Please sign up to gain complete access.

www.mathworksheets4kids.com



3) Check the group

a)



4) Check the group with the fewest stars.

a)



b)



c)

