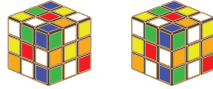


More vs. Fewer

Count the items in each set to answer the question.

1)



Which of these are fewer?




2)




Which of these are more?



3)



Which of these are more?



4)



Which of these are fewer?



PREVIEW

Gain complete access to the largest collection of worksheets in all subjects!

Members, please log in to download this worksheet.

Not a member? Please sign up to gain complete access.

www.mathworksheets4kids.com