


Name : _____

More vs Less

Sheet 1


1

Circle the one with more liquid.



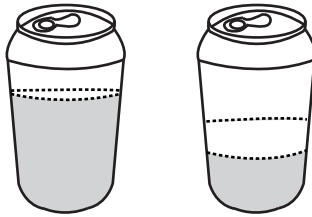
2

Circle the one with less liquid.



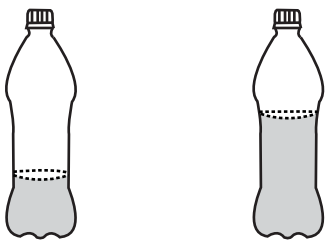
3

Circle the one with less liquid.



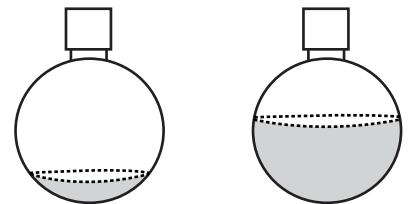
4

Circle the one with more liquid.



5

Circle the one with less liquid.



6

Circle the one that has more liquid.

