


More vs. Fewer

1) Who has more balloons?



2) Which tank has fewer fish?





PREVIEW
Gain complete access to the largest collection of worksheets in all subjects!

Members, please log in to download this worksheet.

Not a member? Please sign up to gain complete access.

www.mathworksheets4kids.com

3) Which plant has fewer tomatoes?



4) Which vase has fewer tulips?

