


# More vs. Fewer


Count and number the items in each group. Check as directed.

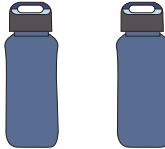
1) Check the group with fewer pens.

**A** 


**B** 

2) Check the group with fewer water bottles.

**A** 





3) Check the group with fewer teapots.

**A** 





4) Check the group with fewer elephants.

**A** 



5) Check the group with fewer vegetables.

**A** 

**B** 

**PREVIEW**

Gain complete access to the largest collection of worksheets in all subjects!

Members, please log in to download this worksheet.

Not a member? Please sign up to gain complete access.

[www.mathworksheets4kids.com](http://www.mathworksheets4kids.com)