



More vs. Fewer

1)



How many  ? _____


How many  ? _____

Which one is more?

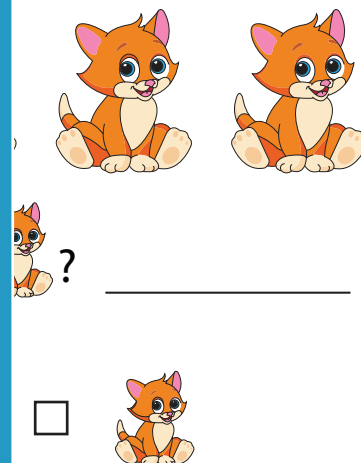



2)



How many  ? _____

Which one is more?



How many  ? _____



3)



How many  ? _____

Which of these are fewer?



How many  ? _____



PREVIEW

Gain complete access to the largest collection of worksheets in all subjects!

Members, please log in to download this worksheet.

Not a member? Please sign up to gain complete access.

www.mathworksheets4kids.com