


# More vs. Fewer

1)



How many  ? \_\_\_\_\_




How many  ? \_\_\_\_\_

Which one is more?




2)



How many  ? \_\_\_\_\_

Which one is more?



 ? \_\_\_\_\_



# PREVIEW

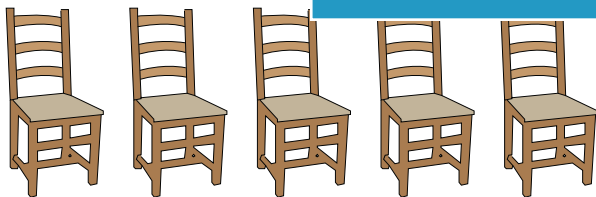
Gain complete access to the largest collection of worksheets in all subjects!

Members, please log in to download this worksheet.

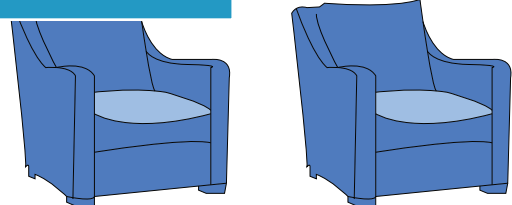
Not a member? Please sign up to gain complete access.

[www.mathworksheets4kids.com](http://www.mathworksheets4kids.com)

3)



How many  ? \_\_\_\_\_



How many  ? \_\_\_\_\_

Which of these are fewer?

