




More vs. Fewer

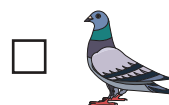
1)





How many  ? _____


How many  ? _____

Which one is more?



2)





How many  ? _____

How many  ? _____

Which one is more?




3)



How many  ? _____

How many  ? _____

Which of these are more?



PREVIEW

Gain complete access to the largest collection of worksheets in all subjects!

Members, please log in to download this worksheet.

Not a member? Please sign up to gain complete access.

www.mathworksheets4kids.com