



Ordering Quantities

Write numbers 1 to 3 to indicate the order of items from fewest to most.

1)



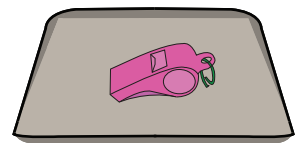
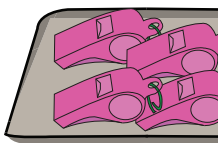
2)



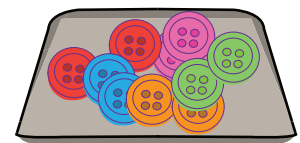
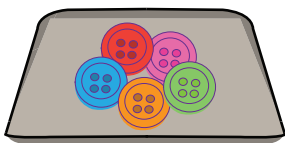
Write numbers 1 to

most to fewest.

3)



4)



PREVIEW

Gain complete access to the largest collection of worksheets in all subjects!

Members, please log in to download this worksheet.

Not a member? Please sign up to gain complete access.

www.mathworksheets4kids.com