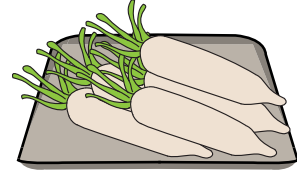

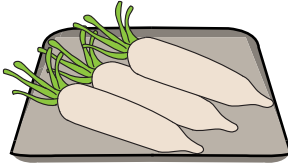



Ordering Sizes

Write 1 to 3 to show the order from fewest to most quantity of items.

1)



2)




PREVIEW

Gain complete access to the largest collection of worksheets in all subjects!

Members, please log in to download this worksheet.



Not a member? Please sign up to gain complete access.

www.mathworksheets4kids.com



Write 1 to 3 to show t

3)



4)

