

Name : _____

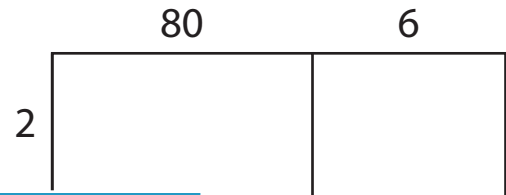
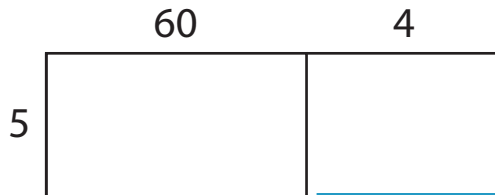
2-Digit by 1-Digit Multiplication

Sheet 1

A) Find the product in each problem using the area model.

1) $64 \times 5 =$ _____

2) $86 \times 2 =$ _____



3) A clothing store has _____ dresses and _____ blouses. How many gowns are there altogether?

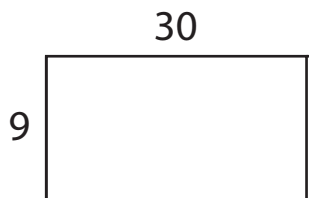
PREVIEW

Gain complete access to the largest collection of worksheets in all subjects!

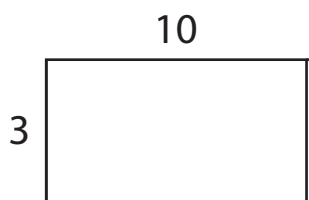
Members, please log in to download this worksheet.

Not a member? Please sign up to gain complete access.

www.mathworksheets4kids.com



4) A box of chocolates contains _____ pieces of chocolate and _____ pieces of chocolate. How many pieces of chocolate are there altogether?



B) Use the area model and complete each multiplication sentence.

1) $53 \times 7 =$ _____

2) $90 \times 8 =$ _____

