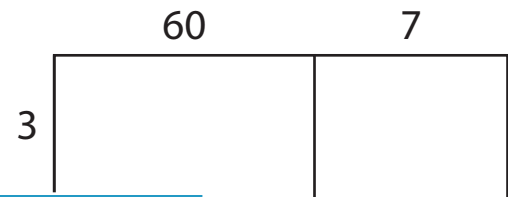
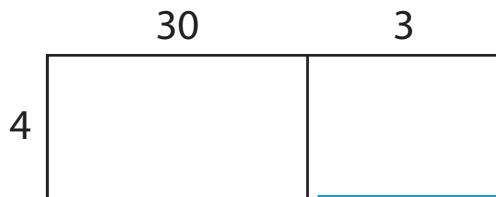


2-Digit by 1-Digit Multiplication

A) Find the product in each problem using the area model.

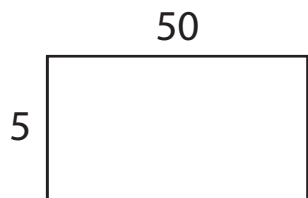
1) $33 \times 4 =$ _____

2) $67 \times 3 =$ _____



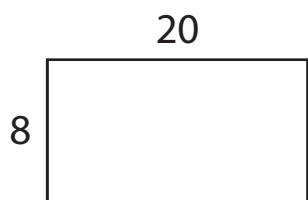
3) A box holds 55 packets.
How many biscuits

ains 5 biscuits.



4) There are 20 baskets.
are there altogether

How many berries



PREVIEW

Gain complete access to the largest
collection of worksheets in all subjects!

Members, please
log in to
download this
worksheet.

Not a member?
Please sign up to
gain complete
access.

www.mathworksheets4kids.com

B) Use the area model and complete each multiplication sentence.

1) $72 \times 9 =$ _____

2) $19 \times 6 =$ _____

