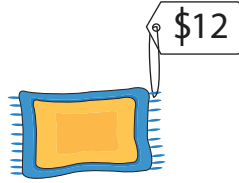


## 2-Digit by 1-Digit Multiplication

A) Check the correct option.

1)  What is the total price of 13 toy cars?

- a) \$56                      b) \$65                      c) \$60

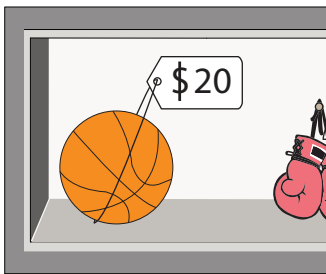
2)  What is the total price of 8 rugs?

- c) \$96

3)  \_\_\_\_\_

- c) \$201


B) 1) John visited a sports store and bought the following items. How much did he spend?



\_\_\_\_\_

	Quantity	Total
_____	2	
_____	7	
<b>Total (\$)</b>		

2) Gina stopped at a grocery store and bought the following items. How much did she spend at the store?



\_\_\_\_\_

Items	Price (\$)	Quantity	Total
Oranges		9	
Apples		6	
<b>Total (\$)</b>			

# PREVIEW

Gain complete access to the largest collection of worksheets in all subjects!

Members, please log in to download this worksheet.

Not a member? Please sign up to gain complete access.

[www.mathworksheets4kids.com](http://www.mathworksheets4kids.com)