

2-Digit by 1-Digit Multiplication

A) Check the correct option.



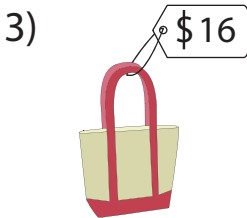
What is the total price of 5 shirts?

- a) \$152 b) \$120 c) \$125



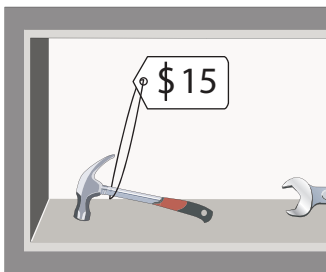
What is the total price of 61 packs of sugar?

- c) \$250



- c) \$30

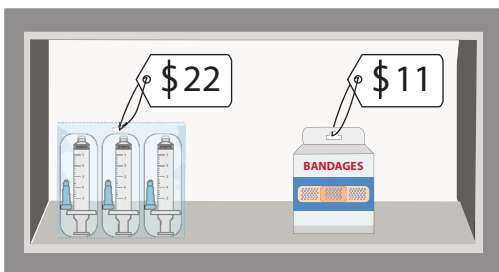
B) 1) Mark stopped at a hardware store and bought the following items. How much did he spend?



How much did he spend?

	Quantity	Total
	6	
	8	
Total (\$)		

2) Ellen went to the pharmacy and bought the following items. What was her total bill?



What was her total bill?

Items	Price (\$)	Quantity	Total
Syringes		3	
Bandages		7	
Total (\$)			

PREVIEW

Gain complete access to the largest collection of worksheets in all subjects!

Members, please log in to download this worksheet.

Not a member? Please sign up to gain complete access.

www.mathworksheets4kids.com