



2-Digit by 1-Digit Multiplication

A) Check the correct option.



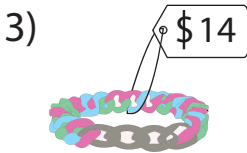
What is the total price of 55 teddy bears?

- a) \$330 b) \$300 c) \$303



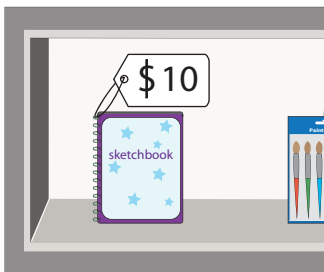
What is the total price of 9 clocks?

- c) \$279



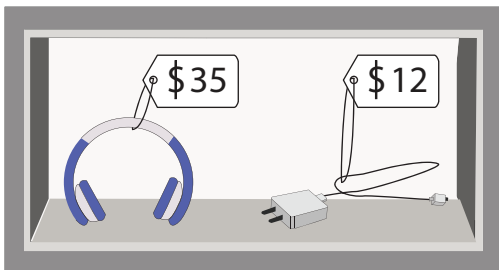
- c) \$98

B) 1) Sophia went to a shop and bought the following items. How much did she spend in all?



2) Alex stopped at a shop and bought the following items.

What was his total expense?



PREVIEW

Gain complete access to the largest collection of worksheets in all subjects!

Members, please log in to download this worksheet.

Not a member? Please sign up to gain complete access.

www.mathworksheets4kids.com

	Quantity	Total
	3	
	4	
Total (\$)		

Items	Price (\$)	Quantity	Total
Headphones		5	
Phone charger		8	
Total (\$)			