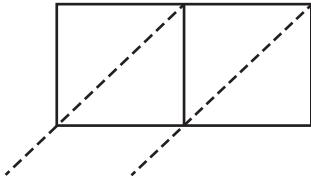


Name : _____

2-Digit by 1-Digit Multiplication

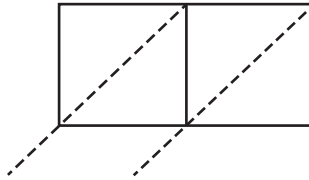
Use lattice multiplication method to find the product in each problem.

1) 91×4



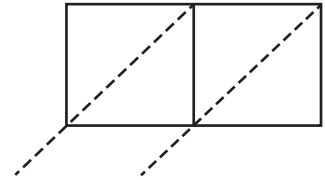
$91 \times 4 =$ _____

2) 58×3



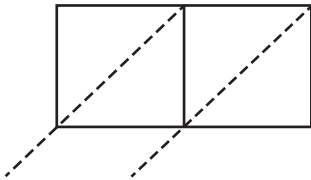
$58 \times 3 =$ _____

3) 49×6



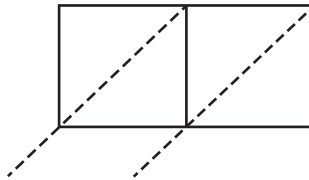
$49 \times 6 =$ _____

4) 64×5



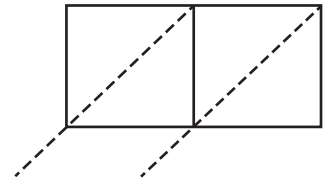
$64 \times 5 =$ _____

5) 86×1



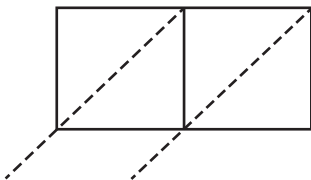
$86 \times 1 =$ _____

6) 70×9



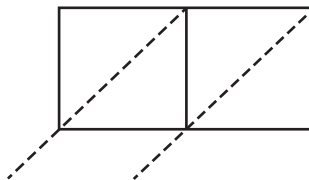
$70 \times 9 =$ _____

7) 19×8



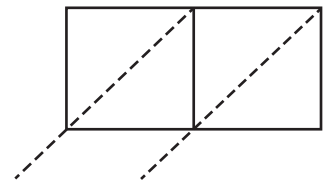
$19 \times 8 =$ _____

8) 24×7



$24 \times 7 =$ _____

9) 37×2



$37 \times 2 =$ _____