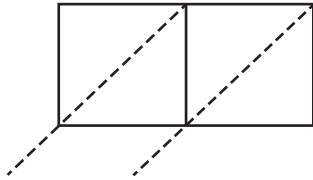


2-Digit by 1-Digit Multiplication

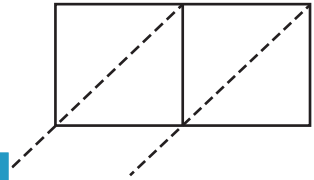
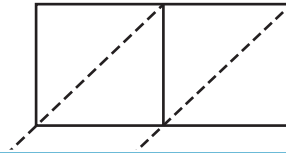
Use lattice multiplication method to find the product in each problem.

1) 26×7



$26 \times 7 =$ _____

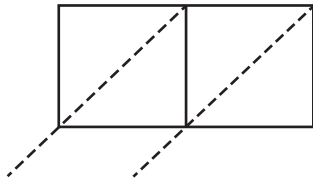
2) 61×3



3) 94×2

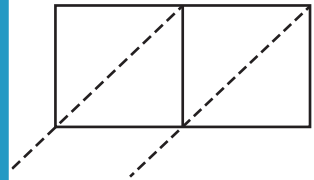
$94 \times 2 =$ _____

4) 75×1



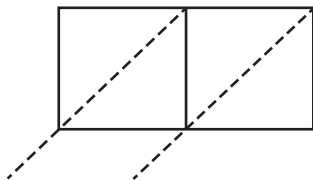
$75 \times 1 =$ _____

80×4

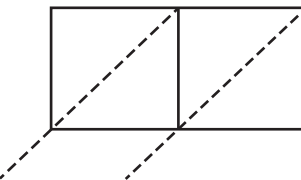


$80 \times 4 =$ _____

7) 47×9

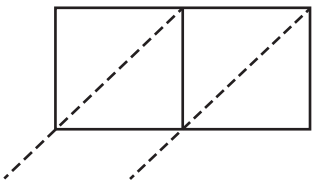


$47 \times 9 =$ _____



$35 \times 5 =$ _____

12×8



$12 \times 8 =$ _____

PREVIEW

Gain complete access to the largest collection of worksheets in all subjects!

Members, please log in to download this worksheet.

Not a member? Please sign up to gain complete access.

www.mathworksheets4kids.com