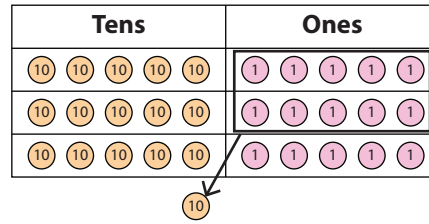


2-Digit by 1-Digit Multiplication

Example: $55 \times 3 = \underline{165}$

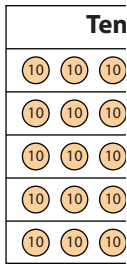
H	T	O
	5	5
×		3
1	6	5



Find the product in each problem.

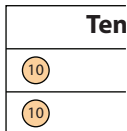
1) $32 \times 5 = \underline{\hspace{2cm}}$

H	T	O
	3	2
×		5



3) Olivia is making finger puppets. How many eyes does she need if she makes 13 puppets?

H	T	O
	1	3
×		2



_____ makes 13 puppets,

PREVIEW

Gain complete access to the largest collection of worksheets in all subjects!

Members, please log in to download this worksheet.

Not a member? Please sign up to gain complete access.

www.mathworksheets4kids.com

4) Freddy taught 24 new recipes in each class. If Anna attended 3 classes, how many new recipes did she learn?

H	T	O
	2	4
×		3

