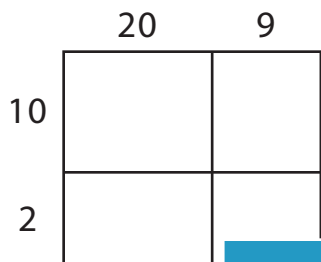


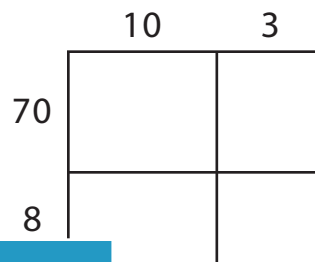
2-Digit by 2-Digit Multiplication

A) Find the product using the area model.

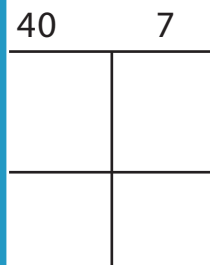
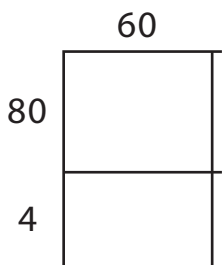
1) $29 \times 12 =$ _____



2) $13 \times 78 =$ _____



3) $65 \times 84 =$ _____



PREVIEW

Gain complete access to the largest collection of worksheets in all subjects!


Members, please log in to download this worksheet.

Not a member? Please sign up to gain complete access.

www.mathworksheets4kids.com

B) Use the area model


1) $81 \times 23 =$ _____



_____ sentence.



3) $54 \times 95 =$ _____



4) $37 \times 68 =$ _____

