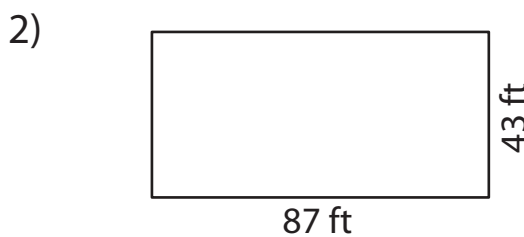
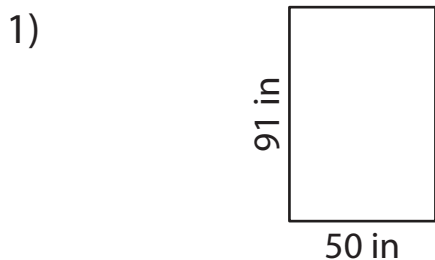


## 2-Digit by 2-Digit Multiplication

Complete the multiplication sentence to find the area.



Area = Length  $\times$  Width

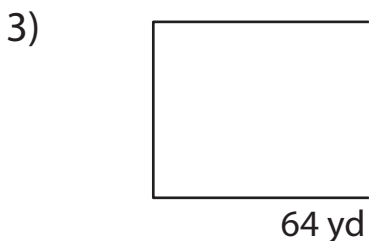
Area = Length  $\times$  Width

Area = \_\_\_\_\_  $\times$  \_\_\_\_\_

\_\_\_\_\_  $\times$  \_\_\_\_\_

Area = \_\_\_\_\_

\_\_\_\_\_  $\text{ft}^2$



Area = \_\_\_\_\_  $\times$  \_\_\_\_\_

\_\_\_\_\_  $\times$  \_\_\_\_\_

Area = \_\_\_\_\_

\_\_\_\_\_  $\text{in}^2$

# PREVIEW

Gain complete access to the largest collection of worksheets in all subjects!

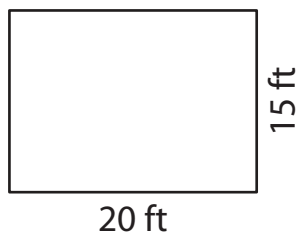
Members, please log in to download this worksheet.

Not a member? Please sign up to gain complete access.

[www.mathworksheets4kids.com](http://www.mathworksheets4kids.com)

5) Sophia's bookstore has a reading room that is 20 feet long. What is the area of the reading room?

\_\_\_\_\_ is 15 feet wide and



Area = \_\_\_\_\_  $\times$  \_\_\_\_\_

The area of the reading room is \_\_\_\_\_.