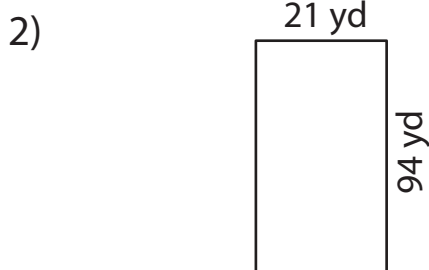
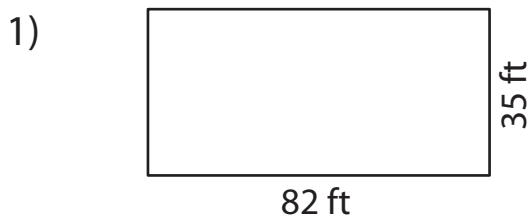


2-Digit by 2-Digit Multiplication

Complete the multiplication sentence to find the area.



Area = Length \times Width

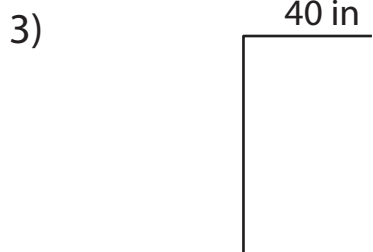
Area = Length \times Width

Area = _____ \times _____

_____ \times _____

Area = _____

_____ yd²



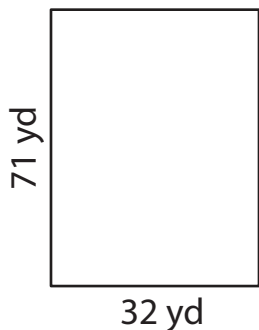
Area = _____

_____ \times _____

Area = _____

_____ ft²

5) The ice rink at Ski _____ is _____ wide and 32 yards long.
What is the area of the rink.



Area = _____ \times _____

The area of the rink is _____.

PREVIEW

Gain complete access to the largest collection of worksheets in all subjects!

Members, please log in to download this worksheet.

Not a member? Please sign up to gain complete access.

www.mathworksheets4kids.com